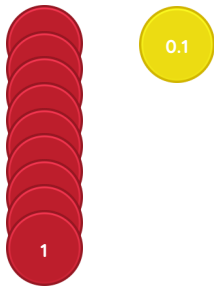


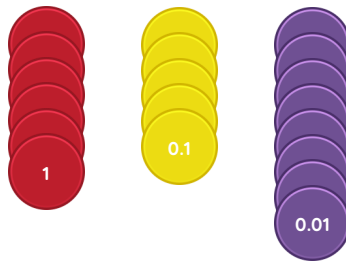
Master The Place Value of Numbers with up to 2 Decimal Places

Fluency 1

Complete the stem sentences.



9.1 has ____ ones and ____ tenth.



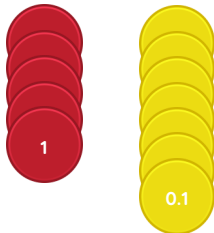
6.58 has ____ ones, ____ tenths and ____ hundredths.



3.02 has ____ ones and ____ hundredths.

Fluency 2

Complete the stem sentences.



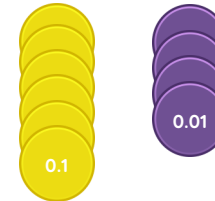
5.7 has ____ tenths.

The value of the digit 7 is ____



2.41 has ____ hundredth.

The value of the digit 1 is ____



0.64 has ____ tenths.

The value of the digit 6 is ____

Reasoning, problem solving, answers and teaching slides are available with a subscription.



Fluency



Master The Place Value of Numbers with up to 2 Decimal Places

Fluency 3

Use the stem sentence to write the values of the digits in each number.

1s	0.1s
3	4

1s	0.1s	0.01s
7	0	9

In _____, the value of the digit _____ is _____

Fluency 3

Use the stem sentence to write the values of the digits in each number.

1s	0.1s
3	4

1s	0.1s	0.01s
7	0	9

In _____, the value of the digit _____ is _____

Fluency 4

Write the value of the underlined digit in each number.

0.9 <u>8</u>	
5. <u>6</u> 9	
<u>6</u> .2	
8.3 <u>7</u>	
1. <u>4</u>	
2.0 <u>5</u>	

Fluency 4

Write the value of the underlined digit in each number.

0.9 <u>8</u>	
5. <u>6</u> 9	
<u>6</u> .2	
8.3 <u>7</u>	
1. <u>4</u>	
2.0 <u>5</u>	

