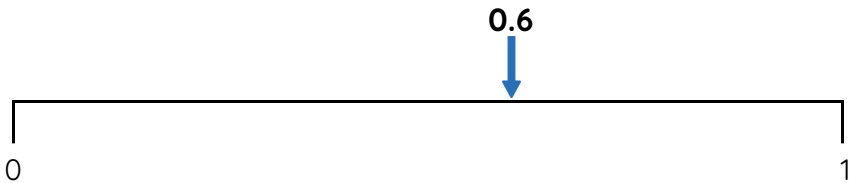


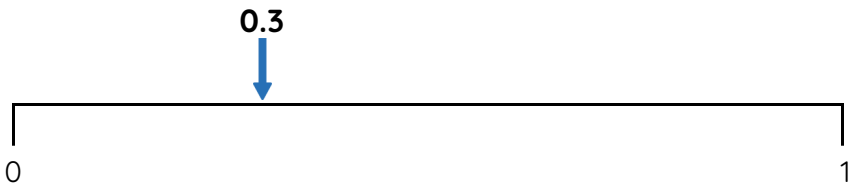
Master Nearest to and Furthest from with Tenths

Fluency 1

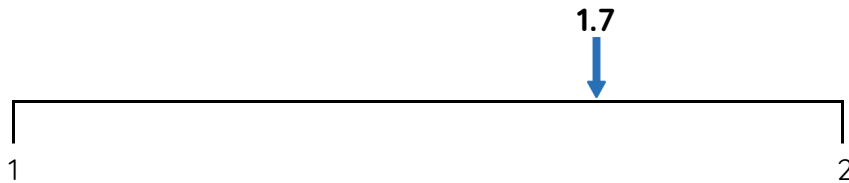
Circle the numbers that complete each stem sentence.



0.6 is further from $0/1$ than $0/1$



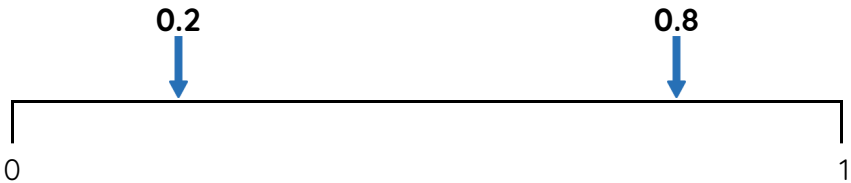
0.3 is nearer to $0/1$ than $0/1$



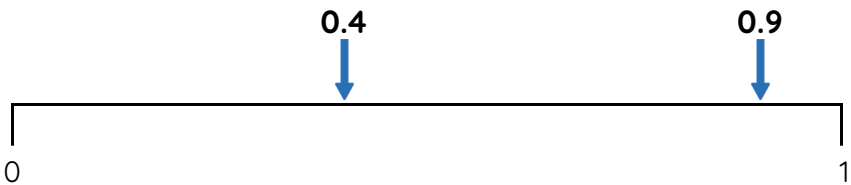
1.7 is nearer to $1/2$ than $1/2$

Fluency 2

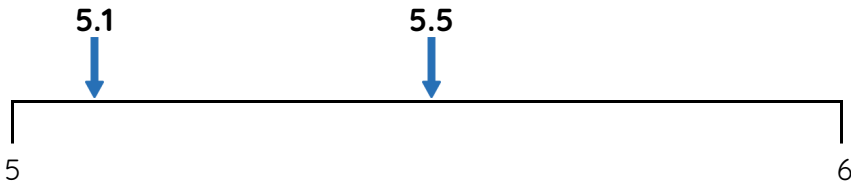
Circle the numbers that complete each stem sentence.



0.2 is nearest to $0/1$ 0.8 is nearest to $0/1$



0.4 is furthest from $0/1$ 0.9 is furthest from $0/1$

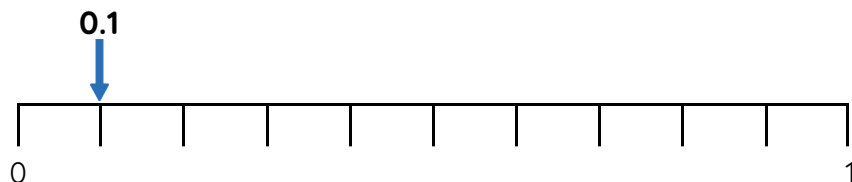


5.1 is furthest from $5/6$ 5.5 is furthest from $5/6$

Master Nearest to and Furthest from with Tenths

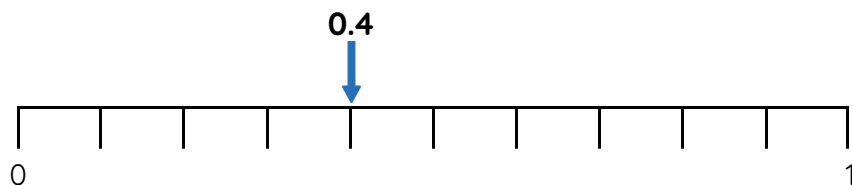
Fluency 3

Circle the numbers that complete each stem sentence.



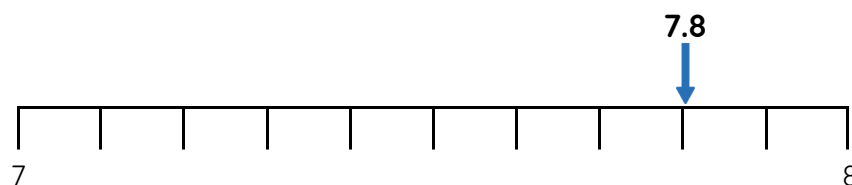
0.1 is _____ away from 0. 0.1 is _____ away from 0.7

0.1 is further from **0 / 0.7** than **0 / 0.7**



0.4 is _____ away from 0.2. 0.4 is _____ away from 0.9

0.4 is nearer to **0.2 / 0.9** than **0.2 / 0.9**

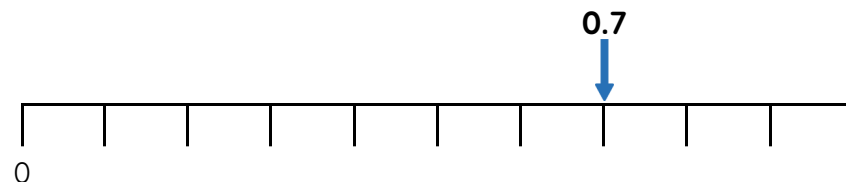


7.8 is _____ away from 7.4. 7.8 is _____ away from 7.9

7.8 is further from **7.4 / 7.9** than **7.4 / 7.9**

Fluency 4

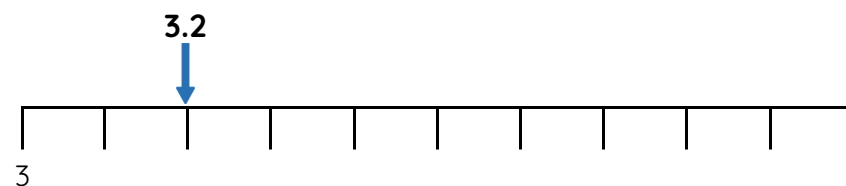
Circle the numbers that complete each stem sentence.



0.7 is nearer to **0.4 / 0.9** than **0.4 / 0.9**



0.9 is further from **0.1 / 1** than **0.1 / 1**



3.2 is nearer to **3 / 3.8** than **3 / 3.8**

Reasoning, problem solving, answers and teaching slides are available with a subscription.



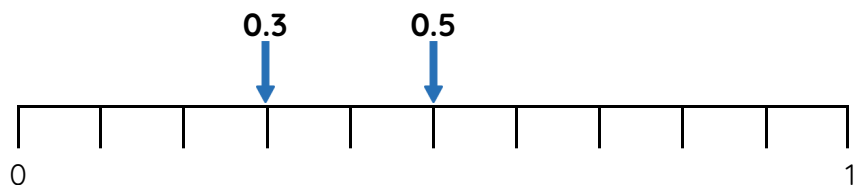
Fluency



Master Nearest to and Furthest from with Tenths

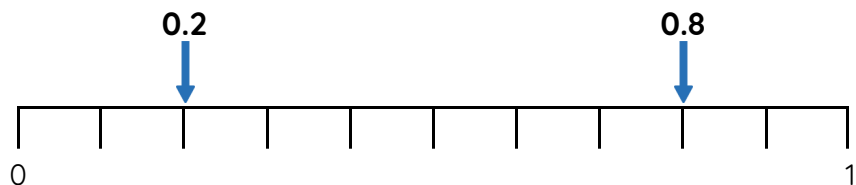
Fluency 5

Circle the numbers that complete each stem sentence.



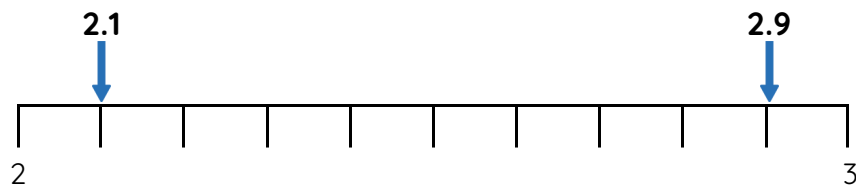
0.3 is _____ away from 0.6. 0.5 is _____ away from 0.6

0.3 / 0.5 is nearest to 0.6



0.2 is _____ away from 0.4. 0.8 is _____ away from 0.4

0.2 / 0.8 is furthest from 0.4

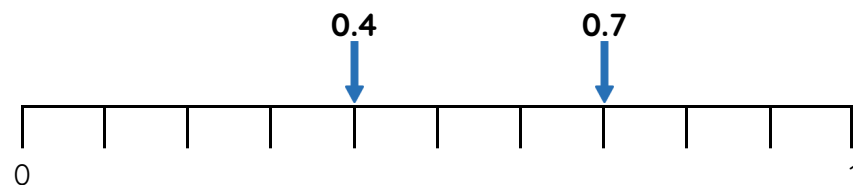


2.9 is _____ away from 2.6. 2.1 is _____ away from 2.6

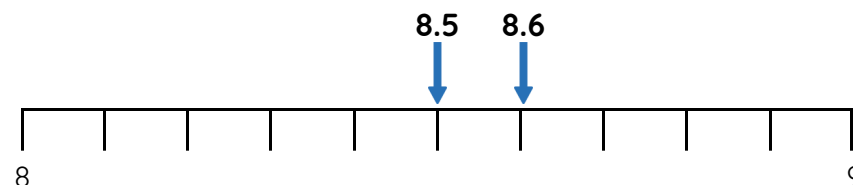
2.9 / 2.1 is nearest to 2.6

Fluency 6

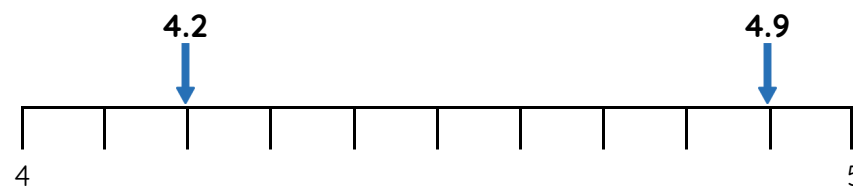
Circle the numbers that complete each stem sentence.



0.4 / 0.7 is furthest from 0.5



8.5 / 8.6 is furthest from 8.1



4.2 / 4.9 is nearest to 4.3

Reasoning, problem solving, answers and teaching slides are available with a subscription.



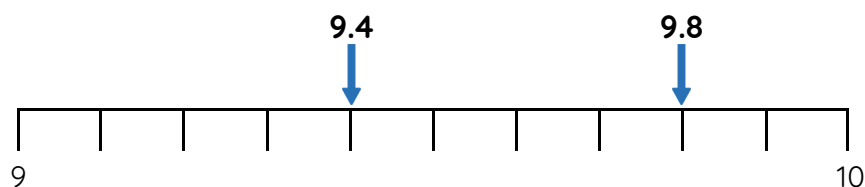
Fluency



Master Nearest to and Furthest from with Tenths

Fluency 7

Complete the stem sentences.



9.4 and ____ are an equal distance from 9.2

9.8 and ____ are an equal distance from 9.5

Fluency 8

Complete the stem sentences.

7.6 is ____ away from 8. 7.7 is ____ away from 8

7.6 / 7.7 is furthest from 8

1.1 is ____ away from 1.4. 1.5 is ____ away from 1.4

1.1 / 1.5 is nearest to 1.4

Fluency 9

Circle the number that completes each stem sentence.

6.3 / 6.6 / 6.2 is furthest from 7

5.9 / 5.5 / 5.7 is nearest to 5

3.4 / 3.8 / 3.1 is nearest to 3.5

8 / 8.9 / 8.5 is furthest from 8.3

Fluency 10

Write the number that makes each stem sentence correct.

2.3 and 2.7 are an equal distance from ____

4.9 and 4.1 are an equal distance from ____

9.4 and 9.6 are an equal distance from ____

1.6 and ____ are an equal distance from 1.7

4 and ____ are an equal distance from 4.5

6.4 and ____ are an equal distance from 6.7

