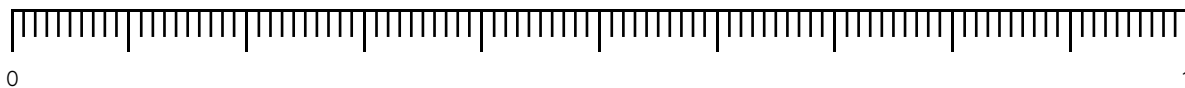


Master Hundredths on a Number Line as Decimals

Fluency 1

Complete the stem sentence.



The value of each major interval is _____

The value of each minor interval is _____

Fluency 2

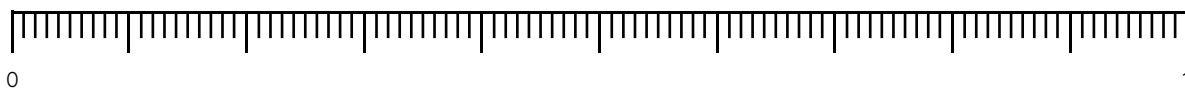
Position the decimal numbers onto the number line.

0.08

0.56

0.2

0.92



Fluency 3

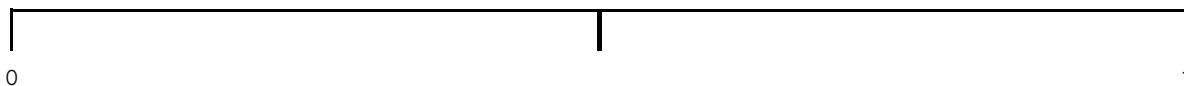
Estimate the position of the decimal numbers on the number line.

0.04

0.34

0.69

0.9



Use the vocabulary to explain how you positioned them.

mid-point

between

near

Fluency



Master Hundredths on a Number Line as Decimals

Fluency 4

Estimate the position of the decimal numbers on the number line.

0.75

0.1

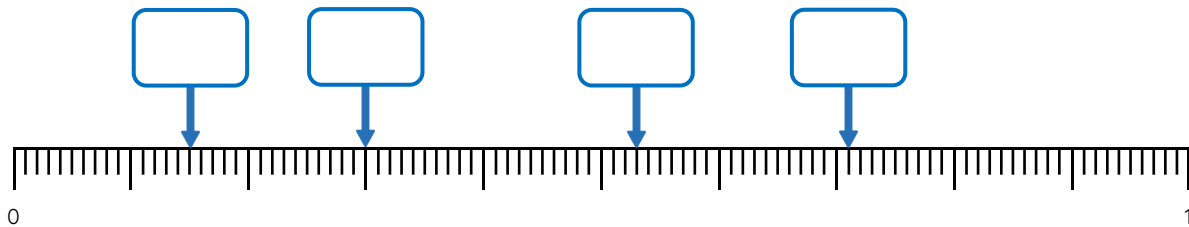
0.87

0.48



Fluency 5

Identify the decimal numbers on the number line.



Fluency 6

Identify the decimal numbers on the number line.

