

Master The Number Line with up to 3 Decimal Places

Fluency 1

Complete the stem sentence.



The value of each major interval is ____ The value of each minor interval is ____

Fluency 2

Position 4.008, 4.024 and 4.061 onto the number line.



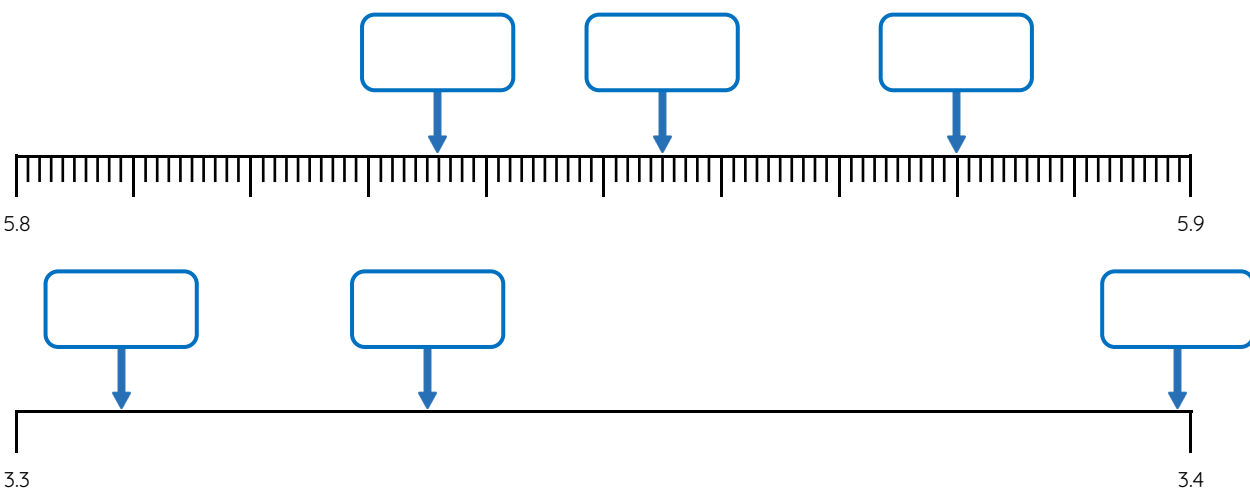
Estimate the position of 9.95, 9.974 and 9.995 on the number line.



Write a stem sentence to describe how you positioned each number.

Fluency 3

Identify the decimal numbers on the number lines.



Reasoning, answers and teaching slides are available with a subscription.



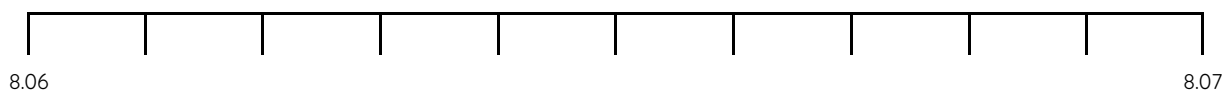
Fluency



Master The Number Line with up to 3 Decimal Places

Fluency 4

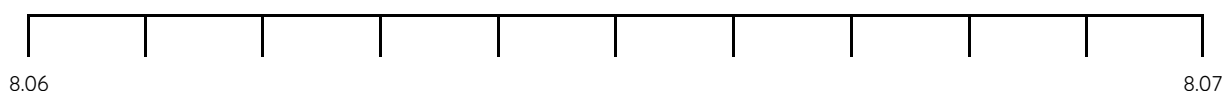
Complete the stem sentence.




The value of each interval is _____

Fluency 5

Position 8.062, 8.064 and 8.067 onto the number line.



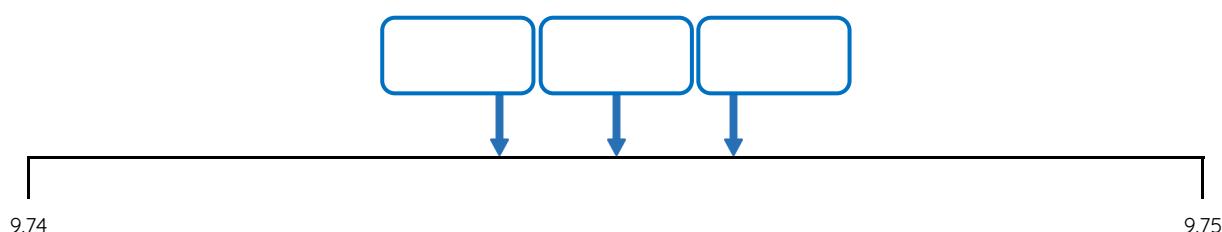
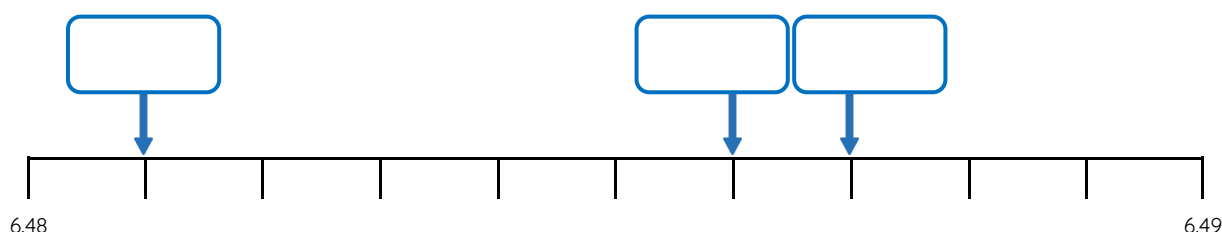
Estimate the position of 1.513, 1.515 and 1.518 on the number line.



Write a stem sentence to describe how you positioned each number.

Fluency 6

Identify the decimal numbers on the number lines.



Reasoning, answers and teaching slides are available with a subscription.



Fluency

