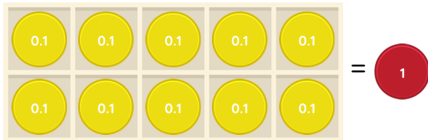


Master Tenths and Hundredths

Fluency 1

Complete each stem sentence.





_____ tenths are equivalent to 1 one.

Tenths occur when 1 _____ is divided into _____ equal parts.

Fluency 2

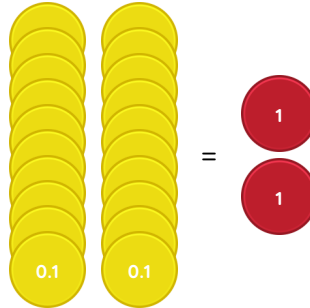
Use the table to complete the stem sentence.

10s	1s	0.1s
		
		

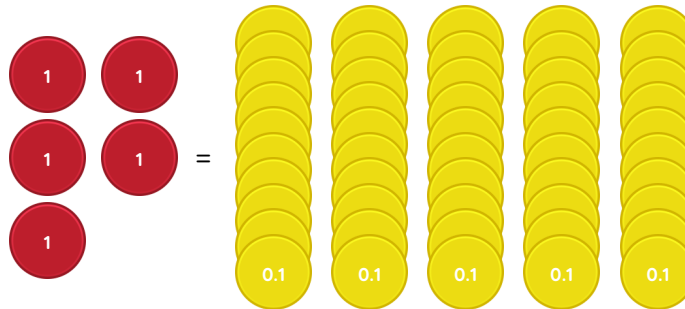
1 is 10 times the size of _____

Fluency 3

Complete each stem sentence.



_____ tenths are equivalent to _____ ones.



_____ ones are equivalent to _____ tenths.

Reasoning, answers and teaching slides are available with a subscription.

Fluency



Master Tenths and Hundredths

Fluency 4

Complete each stem sentence.






_____ hundredths are equivalent to 1 tenth.

Hundredths occur when 1 _____ is divided into _____ equal parts.

Fluency 5

Use the table to complete the stem sentences.

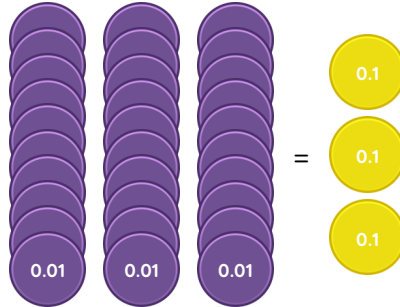
1s	0.1s	0.01s
		
		



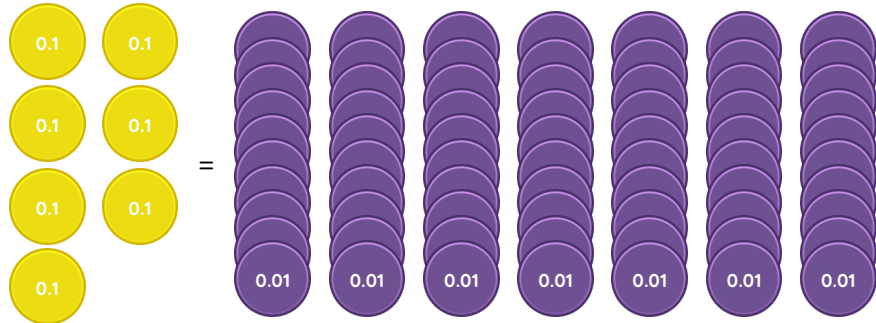
0.1 is 10 times the size of _____

Fluency 6

Complete each stem sentence.



_____ hundredths are equivalent to 3 tenths.



_____ tenths are equivalent to _____ hundredths.

Reasoning, answers and teaching slides are available with a subscription.

Fluency



Master Tenths and Hundredths

Fluency 7

Use the table to complete the stem sentences.

1s	0.1s	0.01s
		●
	●	
●		

_____ hundredths are equivalent to 1 one.

1 is 100 times the size of _____

Hundredths occur when 1 one is divided into _____ equal parts.

Fluency 8

Use your knowledge to complete the stem sentences.

8 tenths are equivalent to _____ hundredths.

_____ tenths are equivalent to 3 ones.

700 hundredths are equivalent to _____ ones.

_____ ones are equivalent to 80 tenths.

90 hundredths are equivalent to _____ tenths.

5 ones are equivalent to _____ hundredths.

Fluency 7

Use the table to complete the stem sentences.

1s	0.1s	0.01s
		●
	●	
●		

_____ hundredths are equivalent to 1 one.

1 is 100 times the size of _____

Hundredths occur when 1 one is divided into _____ equal parts.

Fluency 8

Use your knowledge to complete the stem sentences.

8 tenths are equivalent to _____ hundredths.

_____ tenths are equivalent to 3 ones.

700 hundredths are equivalent to _____ ones.

_____ ones are equivalent to 80 tenths.

90 hundredths are equivalent to _____ tenths.

5 ones are equivalent to _____ hundredths.

