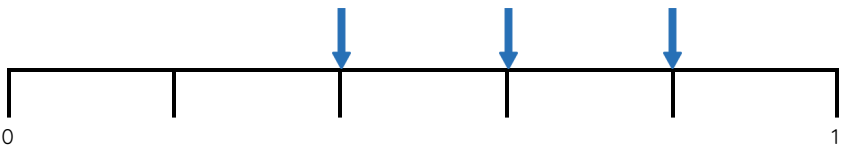


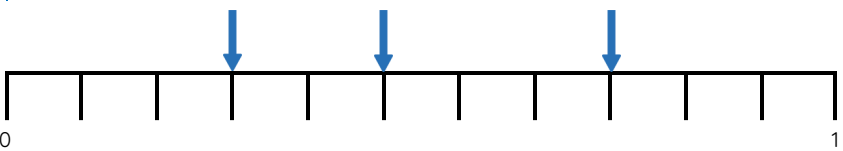
Master Ordering Non-Unit Fractions

Fluency 1

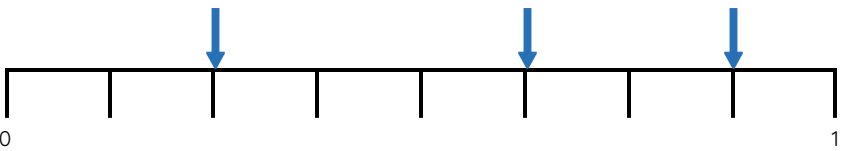
Use the number lines to complete the stem sentences.



The greatest fraction is . The smallest fraction is .



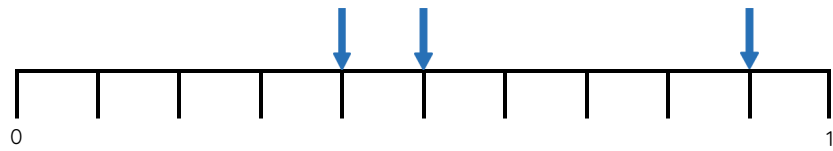
The smallest fraction is . The greatest fraction is .



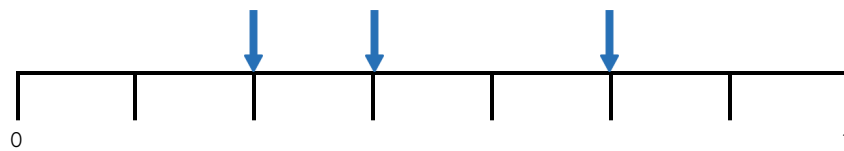
The greatest fraction is . The smallest fraction is .

Fluency 2

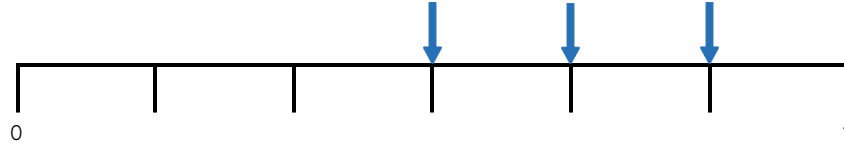
Order each set of fractions in the given order.



smallest greatest



greatest smallest



smallest greatest

Reasoning, problem solving, answers and teaching slides are available with a subscription.



Fluency



Master Ordering Non-Unit Fractions

Fluency 3

Order the fractions in ascending order.

$\frac{3}{9}$	$\frac{1}{9}$	$\frac{8}{9}$
---------------	---------------	---------------

<div>—</div>	<div>—</div>	<div>—</div>
--------------	--------------	--------------

Order the fractions in descending order.

$\frac{2}{6}$	$\frac{1}{6}$	$\frac{3}{6}$
---------------	---------------	---------------

<div>—</div>	<div>—</div>	<div>—</div>
--------------	--------------	--------------

Fluency 4

Fill in the missing numerators to make the order correct.

greatest	$\frac{8}{10}$	$\frac{\quad}{10}$	$\frac{4}{10}$	smallest
----------	----------------	--------------------	----------------	----------

greatest	$\frac{\quad}{12}$	$\frac{5}{12}$	$\frac{\quad}{12}$	smallest
----------	--------------------	----------------	--------------------	----------

smallest	$\frac{\quad}{4}$	$\frac{2}{4}$	$\frac{\quad}{4}$	greatest
----------	-------------------	---------------	-------------------	----------

smallest	$\frac{4}{11}$	$\frac{\quad}{11}$	$\frac{9}{11}$	greatest
----------	----------------	--------------------	----------------	----------

