

# Master The Number Line with up to 2 Decimal Places

## Fluency 1

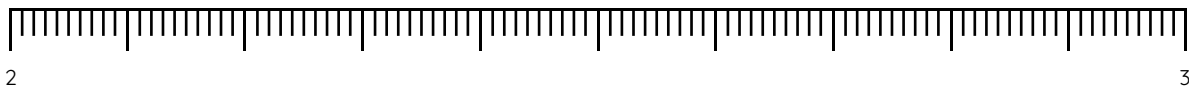
Complete the stem sentence.



The value of each minor interval is \_\_\_\_\_

## Fluency 2

Position 2.28, 2.53 and 2.76 onto the number line.



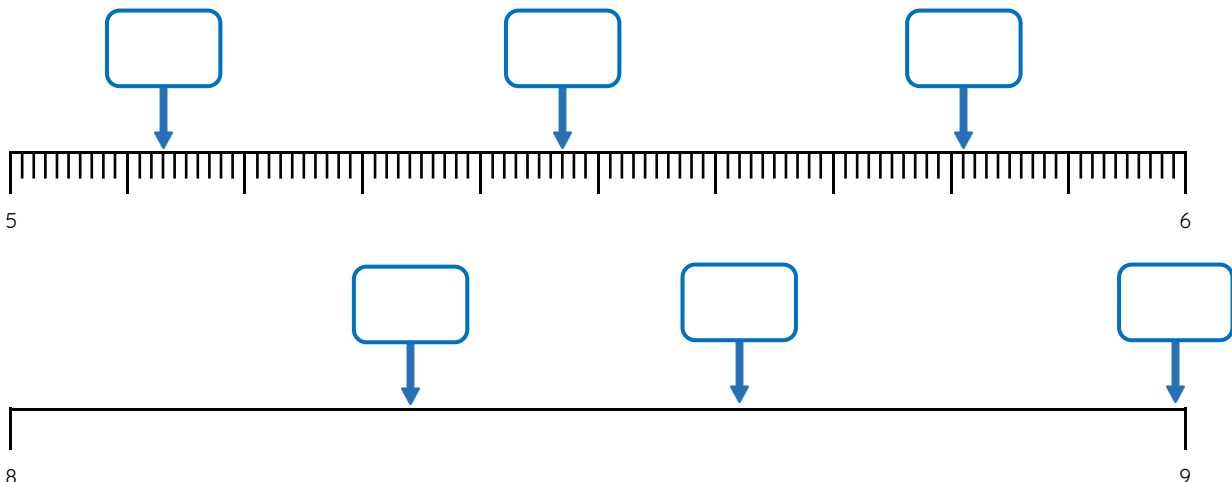
Estimate the position of 6.17, 6.45 and 6.9 on the number line.



Use 'mid-point', 'near to' or 'between' to describe how you positioned each number.

## Fluency 3

Identify the decimal numbers on the number lines.



Optional fluency, reasoning, answers and teaching slides are available with a subscription.



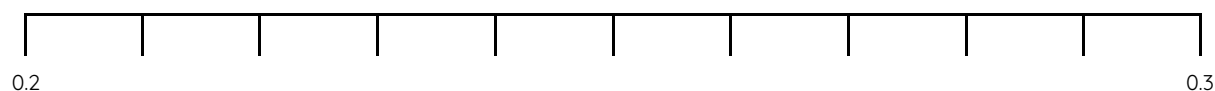
**Fluency**



# Master The Number Line with up to 2 Decimal Places

## Fluency 4

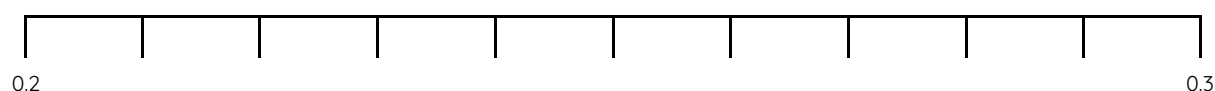
Complete the stem sentence.




The value of each interval is \_\_\_\_\_

## Fluency 5

Position 0.21, 0.26 and 0.28 onto the number line.



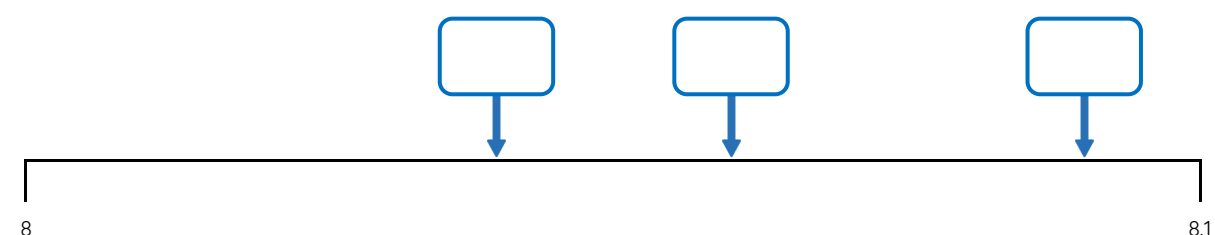
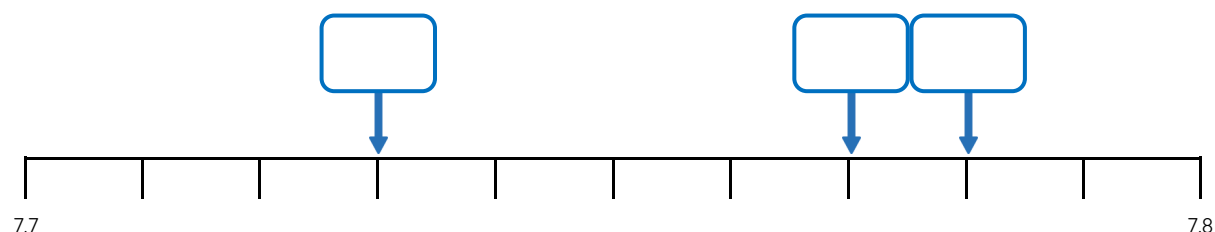
Estimate the position of 4.65, 4.62 and 4.69 on the number line.



Use 'mid-point', 'near to' or 'between' to describe how you positioned each number.

## Fluency 6

Identify the decimal numbers on the number lines.



Optional fluency, reasoning, answers and teaching slides are available with a subscription.



Fluency

