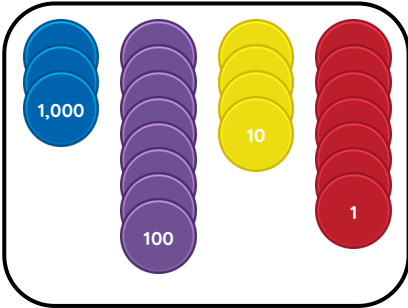
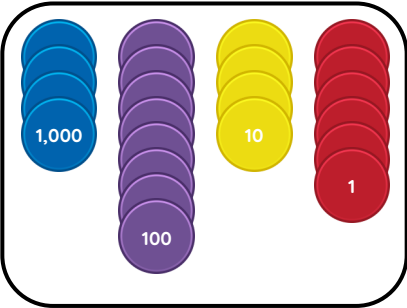
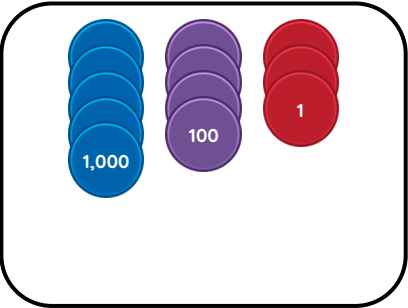


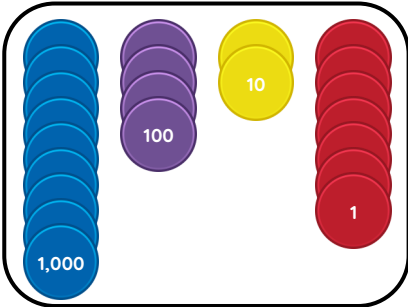
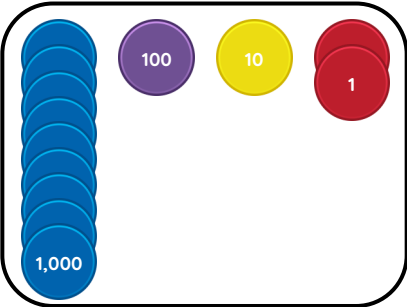
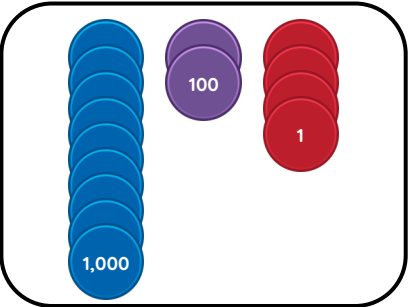
# Master Ordering 4-Digit Numbers

### Fluency 1

Complete the stem sentences.



\_\_\_\_\_ has fewer 1,000s than \_\_\_\_\_ and \_\_\_\_\_. \_\_\_\_\_ has fewer 1,000s than \_\_\_\_\_  
The smallest number is \_\_\_\_\_ and the greatest number is \_\_\_\_\_



\_\_\_\_\_ has more 100s than \_\_\_\_\_ and \_\_\_\_\_. \_\_\_\_\_ has more 100s than \_\_\_\_\_  
The greatest number is \_\_\_\_\_ and the smallest number is \_\_\_\_\_

### Fluency 2

Complete the stem sentences.

1,000s	100s	10s	1s
7	0	0	2
7	3	2	0
7	2	0	2

The greatest number is \_\_\_\_\_ and the smallest number is \_\_\_\_\_

1,000s	100s	10s	1s
1	2	5	4
1	5	4	8
1	5	2	8

The smallest number is \_\_\_\_\_ and the greatest number is \_\_\_\_\_

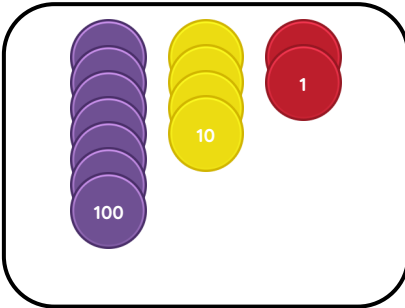
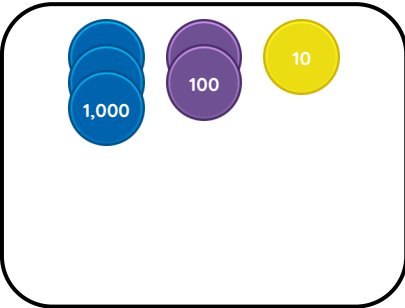
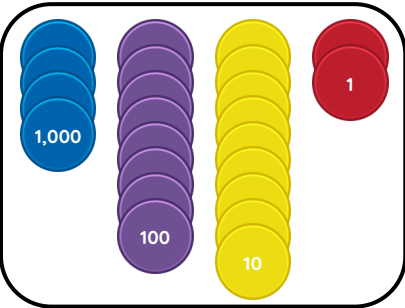
Reasoning, problem solving, answers and teaching slides are available with a subscription.

Fluency

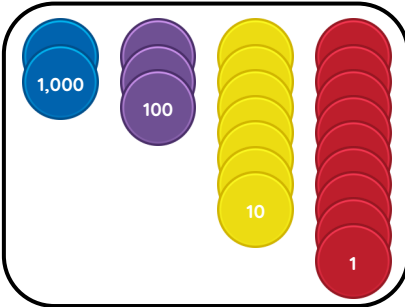
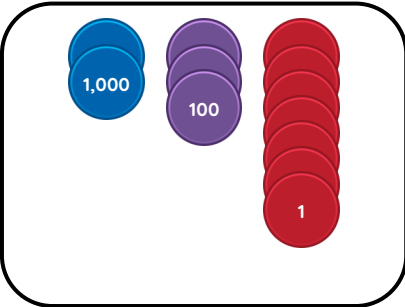
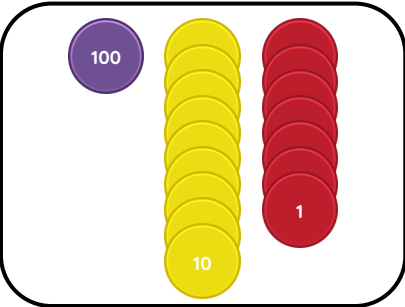
# Master Ordering 4-Digit Numbers

### Fluency 3

Complete the stem sentences.



\_\_\_\_\_ has no 1,000s. \_\_\_\_\_ has more 1,000s than \_\_\_\_\_  
The greatest number is \_\_\_\_\_ and the smallest number is \_\_\_\_\_



\_\_\_\_\_ has no 1,000s. \_\_\_\_\_ has no 10s.  
The smallest number is \_\_\_\_\_ and the greatest number is \_\_\_\_\_

### Fluency 4a

Order the numbers in ascending order.

1,000s	100s	10s	1s
	9	0	7
3	2	1	5
2	6	5	8

\_\_\_\_\_, \_\_\_\_\_, \_\_\_\_\_

1,000s	100s	10s	1s
1	0	0	1
	5	8	1
1	0	3	4

\_\_\_\_\_, \_\_\_\_\_, \_\_\_\_\_

Reasoning, problem solving, answers and teaching slides are available with a subscription.

Fluency

# Master Ordering 4-Digit Numbers

## Fluency 4b

Order the numbers in descending order.

8,971

7,999

8,560

\_\_\_\_\_, \_\_\_\_\_, \_\_\_\_\_

6,108

6,170

5,015

6,071

\_\_\_\_\_, \_\_\_\_\_, \_\_\_\_\_, \_\_\_\_\_

## Fluency 5

Write digits to make the ordering correct.

4,511

4,\_\_\_11

4,811

6,260

6,2\_\_\_5

6,228

981

98\_\_\_

\_\_\_,050

2,005

8,487

\_\_\_,787

\_\_\_,78\_\_\_

6,987

## Fluency 4b

Order the numbers in descending order.

8,971

7,999

8,560

\_\_\_\_\_, \_\_\_\_\_, \_\_\_\_\_

6,108

6,170

5,015

6,071

\_\_\_\_\_, \_\_\_\_\_, \_\_\_\_\_, \_\_\_\_\_

## Fluency 5

Write digits to make the ordering correct.

4,511

4,\_\_\_11

4,811

6,260

6,2\_\_\_5

6,228

981

98\_\_\_

\_\_\_,050

2,005

8,487

\_\_\_,787

\_\_\_,78\_\_\_

6,987

Reasoning, problem solving, answers and teaching slides are available with a subscription.



**Fluency**

