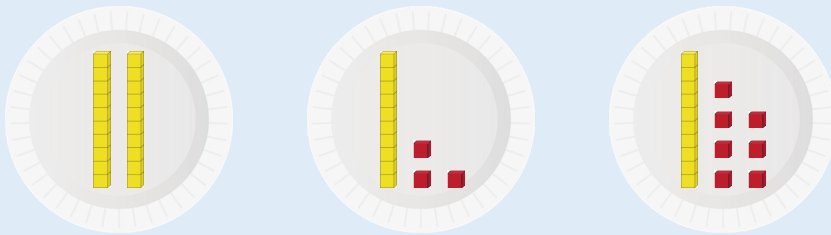


Master Ordering Number Representations to 20 A


Step 1

Make 3 numbers to 20 using Dienes.
Put each of them on a plate.



Step 2

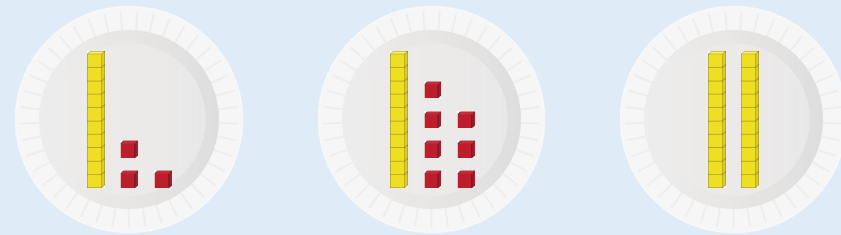
Use the stem sentences to say...
___ has the **most** / **least tens** / **ones**. The greatest number is ___ and the smallest number is ___



20 has the most tens. 13 has the least ones. The greatest number is 20 and the smallest number is 13

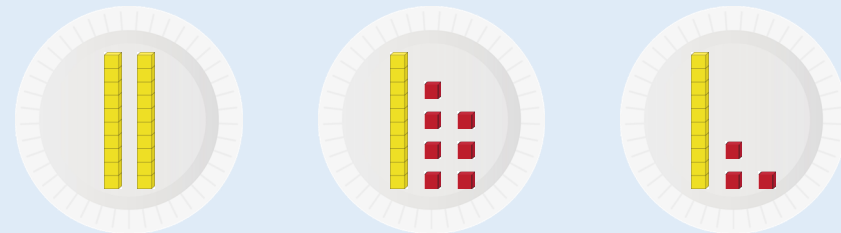
Step 3

Move the plates to order the numbers from smallest to greatest.



Step 4

Now, move the plates to order them from greatest to smallest. Did you need to move all of them?



Repeat the task with 3 new numbers. What do you notice?

