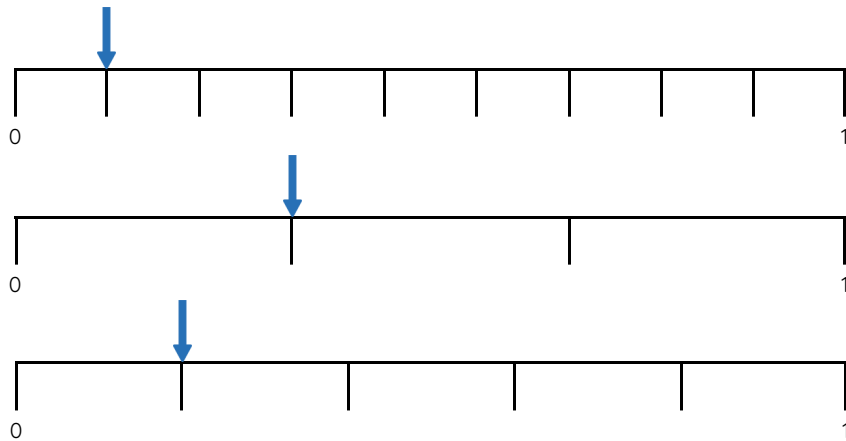


Master Ordering Unit Fractions

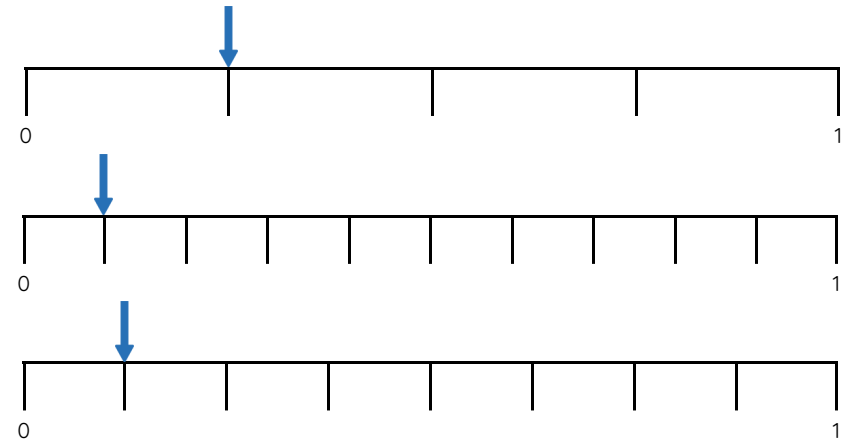
Fluency 1

Use the number lines to complete the stem sentences.



$\frac{1}{8}$ is the smallest unit fraction.

$\frac{1}{8}$ is the greatest unit fraction.



$\frac{1}{8}$ is the greatest unit fraction.

$\frac{1}{8}$ is the smallest unit fraction.

Reasoning, problem solving, answers and teaching slides are available with a subscription.



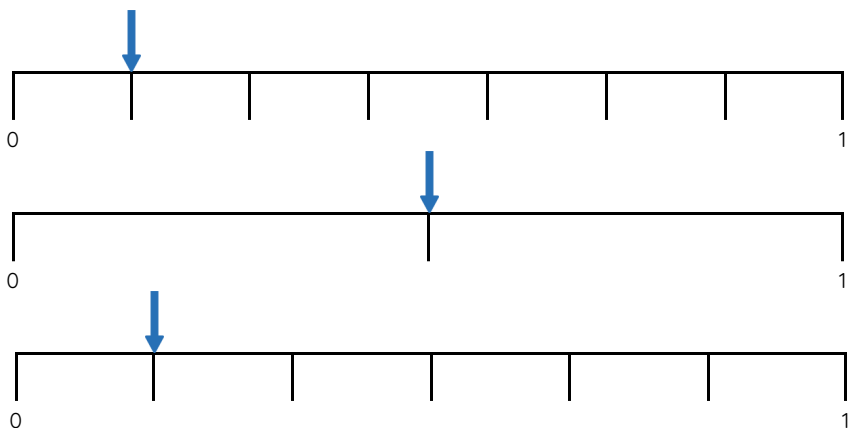
Fluency



Master Ordering Unit Fractions

Fluency 2

Order the unit fractions in ascending order.



smallest

—

—

—

greatest

Fluency 3

Order the unit fractions in descending order.

$\frac{1}{12}$

$\frac{1}{9}$

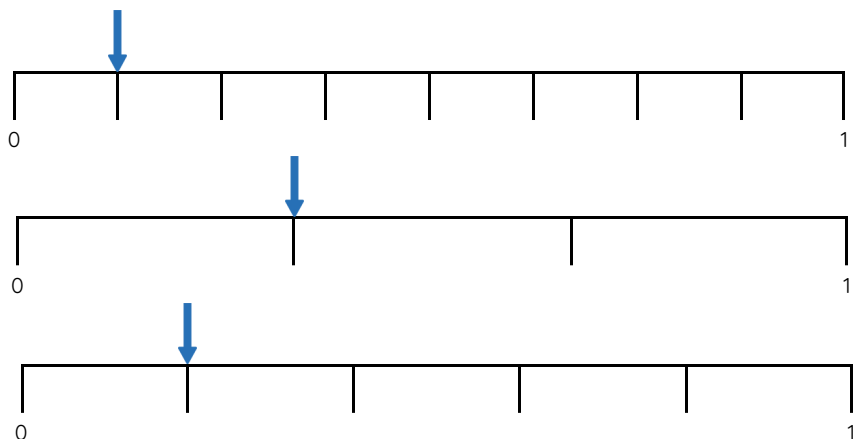
$\frac{1}{11}$

—

—

—

Order the unit fractions in descending order.



greatest

—

—

—

smallest

Order the unit fractions in ascending order.

$\frac{1}{5}$

$\frac{1}{7}$

$\frac{1}{6}$

—

—

—



Master Ordering Unit Fractions

Fluency 4

Fill in the missing denominators to make the order correct.

greatest	$\frac{1}{4}$	$\frac{1}{\quad}$	$\frac{1}{10}$	smallest
greatest	$\frac{1}{\quad}$	$\frac{1}{5}$	$\frac{1}{\quad}$	smallest
smallest	$\frac{1}{\quad}$	$\frac{1}{4}$	$\frac{1}{\quad}$	greatest
smallest	$\frac{1}{9}$	$\frac{1}{\quad}$	$\frac{1}{7}$	greatest

Fluency 4

Fill in the missing denominators to make the order correct.

greatest	$\frac{1}{4}$	$\frac{1}{\quad}$	$\frac{1}{10}$	smallest
greatest	$\frac{1}{\quad}$	$\frac{1}{5}$	$\frac{1}{\quad}$	smallest
smallest	$\frac{1}{\quad}$	$\frac{1}{4}$	$\frac{1}{\quad}$	greatest
smallest	$\frac{1}{9}$	$\frac{1}{\quad}$	$\frac{1}{7}$	greatest

