


Master Tenths

Fluency 1

Complete the stem sentences.



Tenths occur when 1 _____ is divided into _____ equal parts.
_____ tenths are equivalent to 1 one.

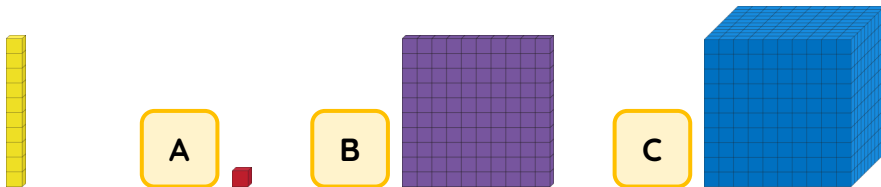
Fluency 2

Complete the stem sentence.

1 one is _____ times the size of 1 tenth.

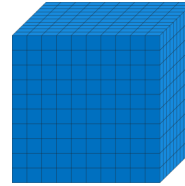
Fluency 3

If the tens block represents 1 one, tick the block which represents 1 tenth.



Fluency 4

Circle the correct word to complete the statement.



If a thousands block represents 1 one, a **ones** / **hundreds** / **tens** block represents 1 tenth.

Fluency 5

If a hundreds block represents 1 one, draw the block that represents 1 tenth.

