

# Master Thousandths on a Number Line as Decimals

## Fluency 1

Complete the stem sentence using the number line.



The value of each major interval is \_\_\_\_\_

The value of each minor interval is \_\_\_\_\_

## Fluency 2

Position the decimal numbers onto the number line.



0.462

0.009

0.837

0.31

## Fluency 3

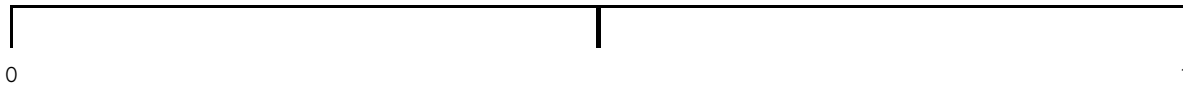
Estimate the position of the decimal numbers on the number line.

0.546

0.9

0.273

0.198



Write a stem sentence to describe how you positioned each number.

## Fluency 4

Estimate the position of the decimal numbers on the number line.

0.005

0.624

0.38

0.459



## Fluency 5

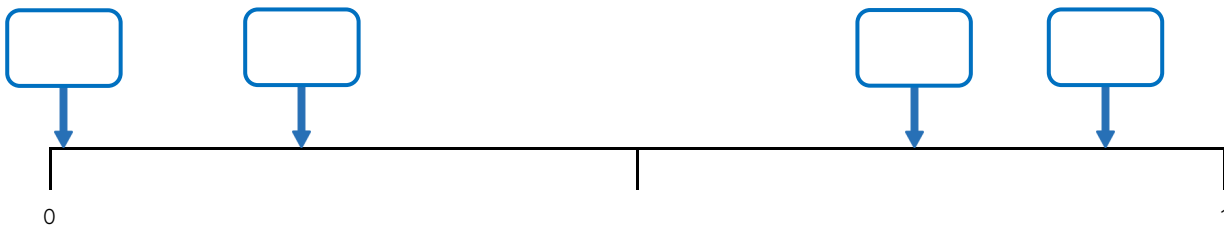
Identify the decimal numbers on the number line.



# Master Thousandths on a Number Line as Decimals

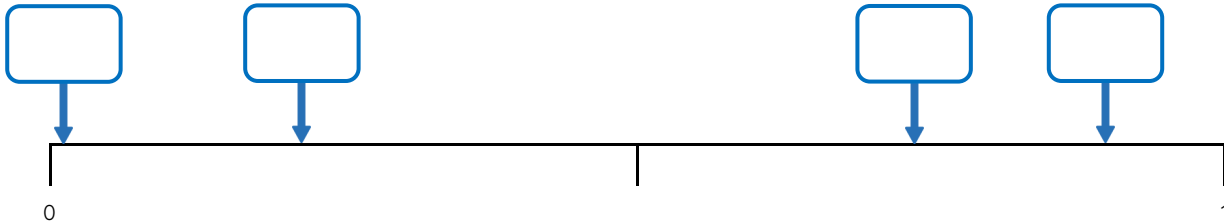
## Fluency 6

Identify the decimal numbers on the number line.



## Fluency 6

Identify the decimal numbers on the number line.



## Fluency 6

Identify the decimal numbers on the number line.

