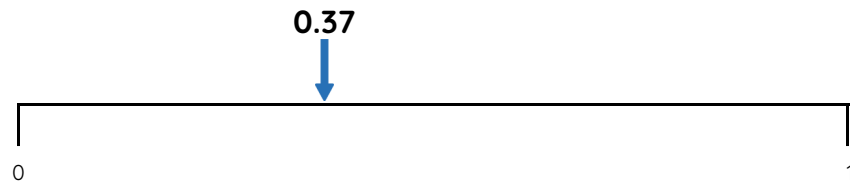


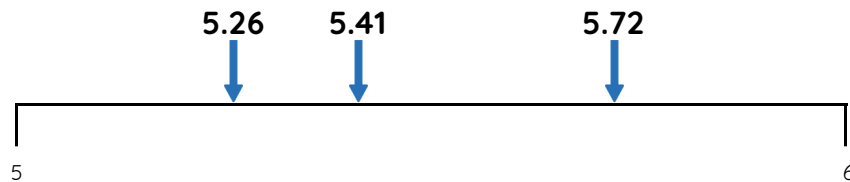
Master Nearest to and Furthest from with Hundredths

Fluency 1

Circle the numbers that complete each stem sentence.



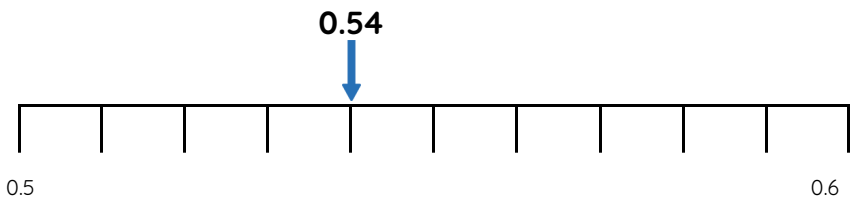
0.37 is further from **0 / 1** than **0 / 1**



5.26 / 5.41 / 5.72 is nearest to 6

Fluency 3

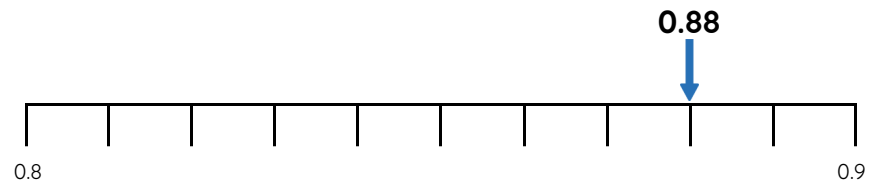
Circle the numbers that complete each stem sentence.



0.54 is further from **0.5 / 0.6** than **0.5 / 0.6**

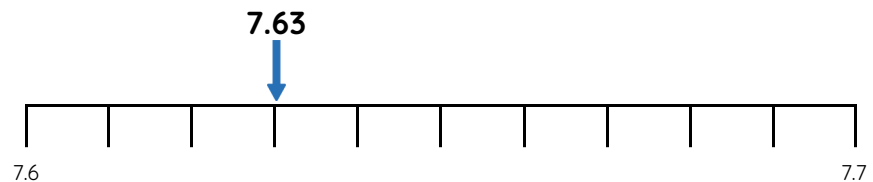
Fluency 2

Complete the stem sentences.



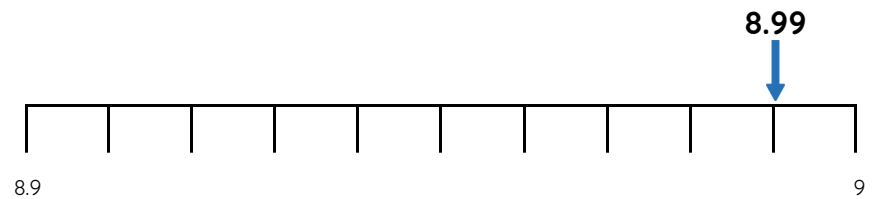
0.88 is _____ away from 0.8. 0.88 is _____ away from 0.9

0.88 is further from **0.8 / 0.9** than **0.8 / 0.9**



7.63 is _____ away from 7.6. 7.63 is _____ away from 7.7

7.63 is nearer to **7.6 / 7.7** than **7.6 / 7.7**



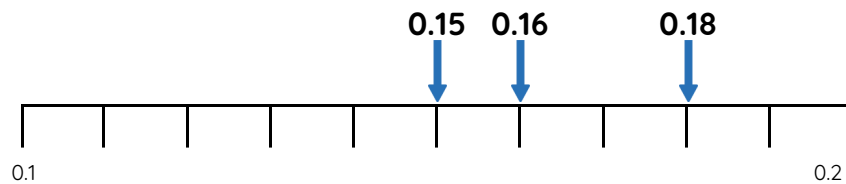
8.99 is nearer to **8.9 / 9** than **8.9 / 9**



Master Nearest to and Furthest from with Hundredths

Fluency 4

Circle the numbers that complete each stem sentence.



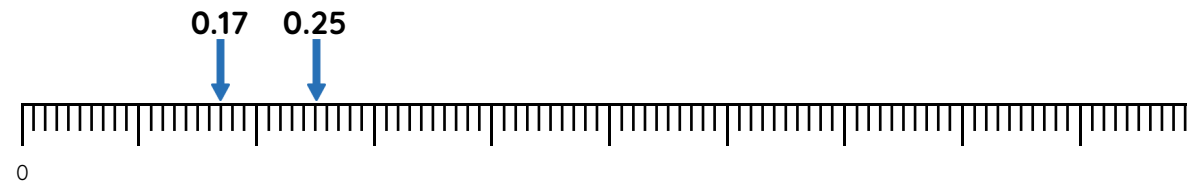
0.15 / 0.16 / 0.18 is furthest from 0.2



3.09 / 3.01 / 3.03 is nearest to 3

Fluency 5

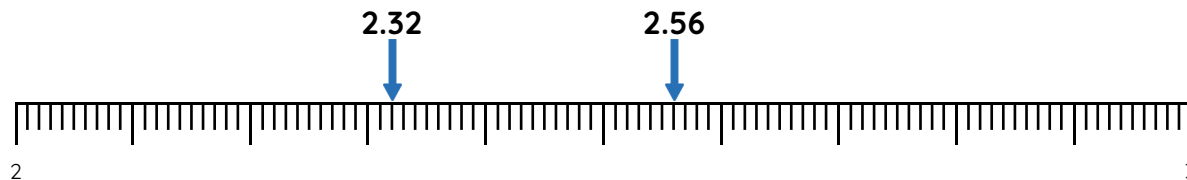
Complete the stem sentences.



0.17 is ____ away from 0.2

0.25 is ____ away from 0.2

0.17 / 0.25 is nearest to 0.2



2.32 is ____ away from 2.4

2.56 is ____ away from 2.4

2.32 / 2.56 is furthest from 2.4

Reasoning, answers and teaching slides are available with a subscription.



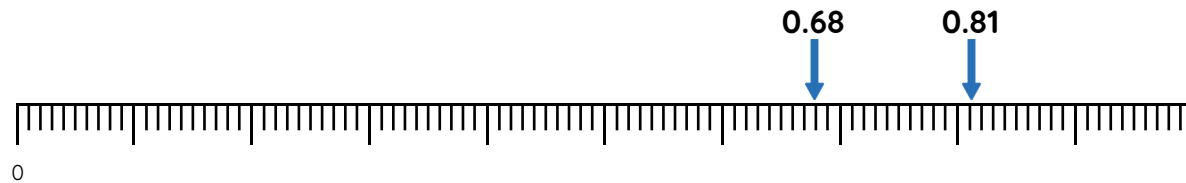
Fluency



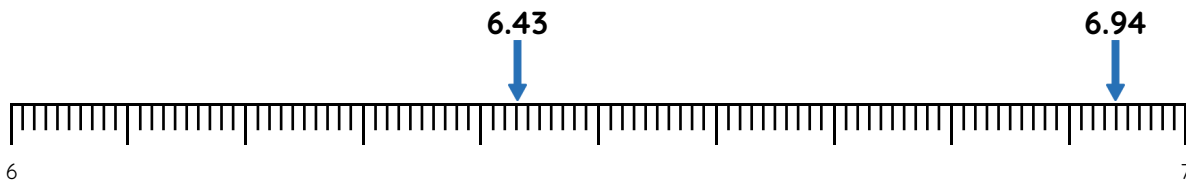
Master Nearest to and Furthest from with Hundredths

Fluency 6

Circle the numbers that complete each stem sentence.



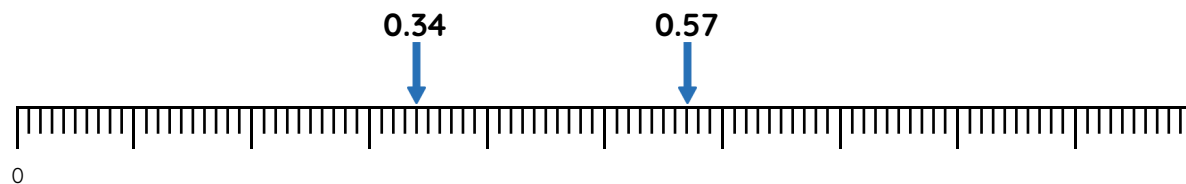
0.68 / 0.81 is nearest to 0.7



6.43 / 6.94 is furthest from 6.6

Fluency 7

Complete the stem sentences.



0.34 is ____ away from 0.45

0.57 is ____ away from 0.45

0.34 / 0.57 is nearest to 0.45



1.72 is ____ away from 1.79

1.85 is ____ away from 1.79

1.72 / 1.85 is furthest from 1.79

Reasoning, answers and teaching slides are available with a subscription.



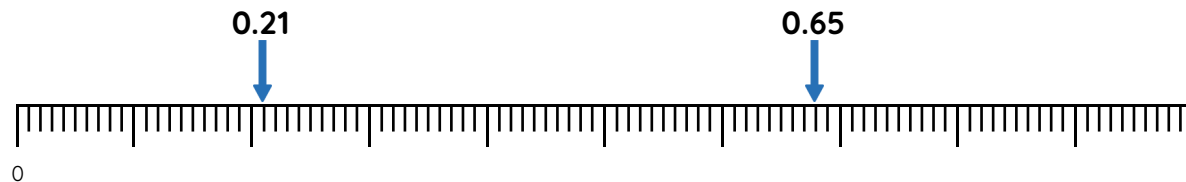
Fluency



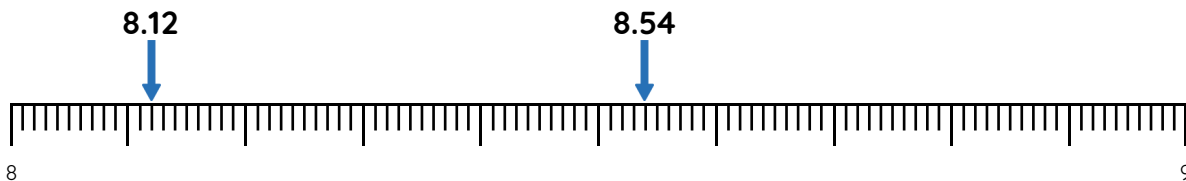
Master Nearest to and Furthest from with Hundredths

Fluency 8

Circle the numbers that complete each stem sentence.



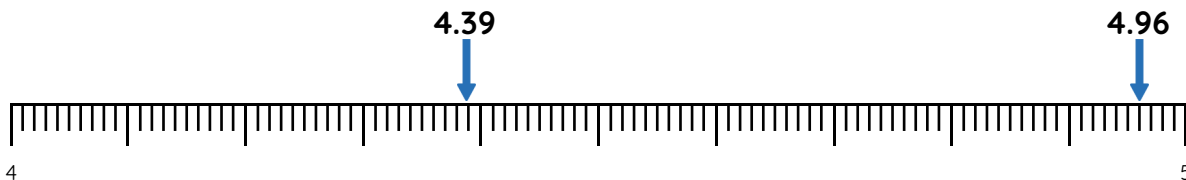
0.65 / 0.21 is furthest from 0.42



8.12 / 8.54 is nearest to 8.32

Fluency 9

Complete the stem sentences.



4.39 and _____ are an equal distance from 4.47

4.96 and _____ are an equal distance from 4.84

Reasoning, answers and teaching slides are available with a subscription.



Fluency



Master Nearest to and Furthest from with Hundredths

Fluency 10

Complete the stem sentences.

7.92 is ____ away from 8. 8.07 is ____ away from 8.

7.92 / 8.07 is furthest from 8

5.14 is ____ away from 4.9. 4.82 is ____ away from 4.9

5.14 / 4.82 is furthest from 4.9

8.58 is ____ away from 8.71. 8.97 is ____ away from 8.71

8.58 / 8.97 is nearest to 8.71

Fluency 11

Circle the number that completes each stem sentence.

3.09 / 3.41 / 3.25 is nearest to 4

6.73 / 6.25 / 6.58 is furthest from 7

5.03 / 5.29 / 5.23 is nearest to 5.3

9.45 / 9.71 / 9.06 is furthest from 9.6

2.36 / 2.67 / 2.58 is nearest to 2.48

0.95 / 0.08 / 0.86 is furthest from 0.81

Fluency 10

Complete the stem sentences.

7.92 is ____ away from 8. 8.07 is ____ away from 8.

7.92 / 8.07 is furthest from 8

5.14 is ____ away from 4.9. 4.82 is ____ away from 4.9

5.14 / 4.82 is furthest from 4.9

8.58 is ____ away from 8.71. 8.97 is ____ away from 8.71

8.58 / 8.97 is nearest to 8.71

Fluency 11

Circle the number that completes each stem sentence.

3.09 / 3.41 / 3.25 is nearest to 4

6.73 / 6.25 / 6.58 is furthest from 7

5.03 / 5.29 / 5.23 is nearest to 5.3

9.45 / 9.71 / 9.06 is furthest from 9.6

2.36 / 2.67 / 2.58 is nearest to 2.48

0.95 / 0.08 / 0.86 is furthest from 0.81



Master Nearest to and Furthest from with Hundredths

Fluency 12

Write the number that makes each stem sentence correct.

1.12 and 1.48 are an equal distance from _____

7.36 and 7.74 are an equal distance from _____

4.65 and 4.77 are an equal distance from _____

6.24 and _____ are an equal distance from 6.5

2.61 and _____ are an equal distance from 2.8

3.09 and _____ are an equal distance from 3.43

Fluency 12

Write the number that makes each stem sentence correct.

1.12 and 1.48 are an equal distance from _____

7.36 and 7.74 are an equal distance from _____

4.65 and 4.77 are an equal distance from _____

6.24 and _____ are an equal distance from 6.5

2.61 and _____ are an equal distance from 2.8

3.09 and _____ are an equal distance from 3.43

Fluency 12

Write the number that makes each stem sentence correct.

1.12 and 1.48 are an equal distance from _____

7.36 and 7.74 are an equal distance from _____

4.65 and 4.77 are an equal distance from _____

6.24 and _____ are an equal distance from 6.5

2.61 and _____ are an equal distance from 2.8

3.09 and _____ are an equal distance from 3.43

Fluency 12

Write the number that makes each stem sentence correct.

1.12 and 1.48 are an equal distance from _____

7.36 and 7.74 are an equal distance from _____

4.65 and 4.77 are an equal distance from _____

6.24 and _____ are an equal distance from 6.5

2.61 and _____ are an equal distance from 2.8

3.09 and _____ are an equal distance from 3.45

Reasoning, answers and teaching slides are available with a subscription.



Fluency

