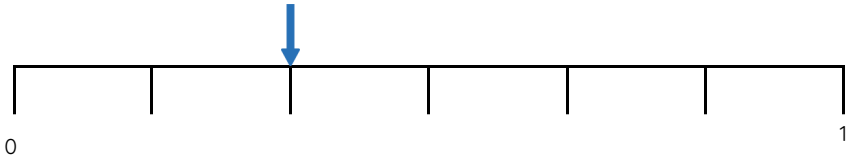


Master Comparing Non-Unit Fractions

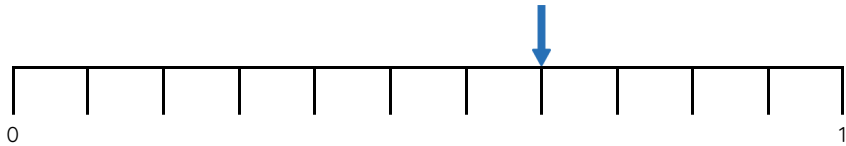
Fluency 1

Use the number lines to complete the stem sentences.



The whole is divided into ____ equal parts.

The non-unit fraction is

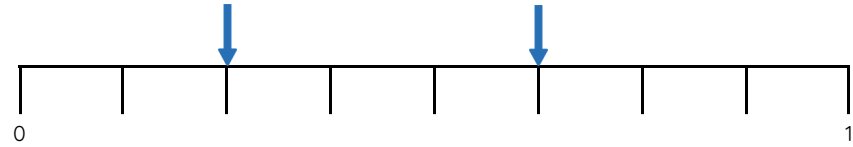


The whole is divided into ____ equal parts.

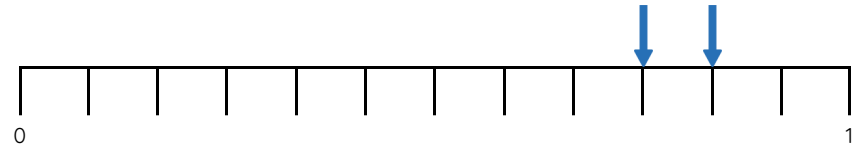
The non-unit fraction is

Fluency 2

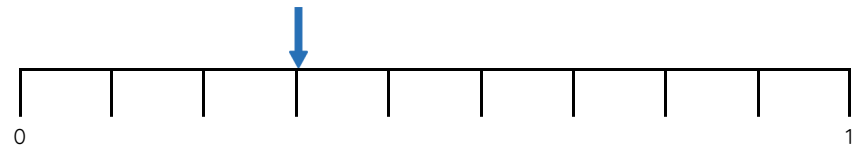
Use the number lines to complete the stem sentences.



is greater than



is less than



is equal to

Reasoning, problem solving, answers and teaching slides are available with a subscription.



Fluency



Master Comparing Non-Unit Fractions

Fluency 3

Complete the stem sentences.

When fractions have the same denominator, the greater the numerator, the _____ the fraction.

When fractions have the same denominator, the smaller the numerator, the _____ the fraction.

Fluency 4

Complete the sentences using greater than, less than or equal to.

$$\frac{7}{10} \text{ is } \underline{\hspace{2cm}} \frac{6}{10}$$

$$\frac{2}{4} \text{ is } \underline{\hspace{2cm}} \frac{2}{4}$$

$$\frac{1}{3} \text{ is } \underline{\hspace{2cm}} \frac{2}{3}$$

Fluency 5

Include <, > or = to make the statements correct.

$$\frac{1}{5} \bigcirc \frac{2}{5}$$

$$\frac{5}{6} \bigcirc \frac{3}{6}$$

$$\frac{3}{12} \bigcirc \frac{3}{12}$$

$$\frac{7}{9} \bigcirc \frac{8}{9}$$

Fluency 6

Fill in the missing digits to complete the comparisons.

$$\frac{3}{4} > \frac{\hspace{1cm}}{4}$$

$$\frac{\hspace{1cm}}{11} < \frac{10}{11}$$

$$\frac{4}{8} < \frac{\hspace{1cm}}{8}$$

$$\frac{\hspace{1cm}}{10} = \frac{2}{10}$$