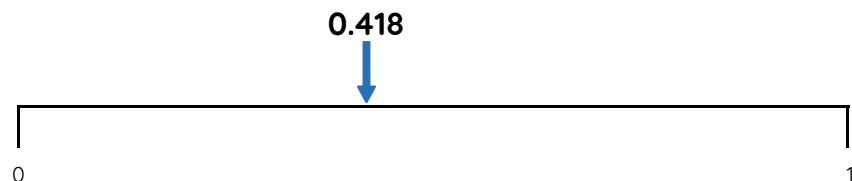


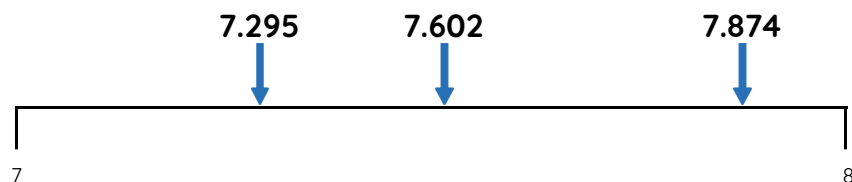
Master Nearest to and Furthest from with Thousandths

Fluency 1

Circle the numbers that complete each stem sentence.



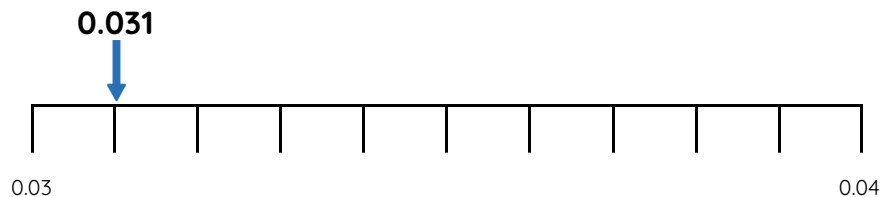
0.418 is further from **0 / 1** than **0 / 1**



7.295 / 7.602 / 7.874 is nearest to 8

Fluency 3

Circle the numbers that complete each stem sentence.



0.031 is further from **0.03 / 0.04** than **0.03 / 0.04**

Fluency 2

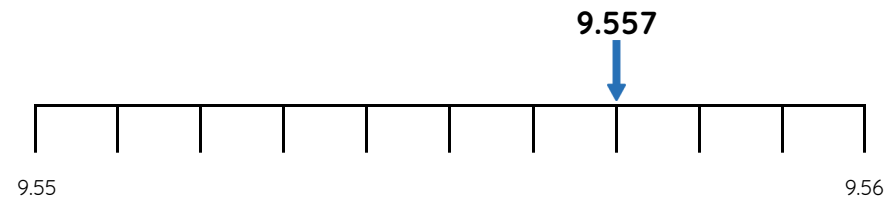
Complete the stem sentences.



0.763 is _____ away from 0.76. 0.763 is _____ away from 0.77. 0.763 is further from **0.76 / 0.77** than **0.76 / 0.77**



5.149 is _____ away from 5.14. 5.149 is _____ away from 5.15. 5.149 is nearer to **5.14 / 5.15** than **5.14 / 5.15**



9.557 is nearer to **9.55 / 9.56** than **9.55 / 9.56**

Reasoning, answers and teaching slides are available with a subscription.



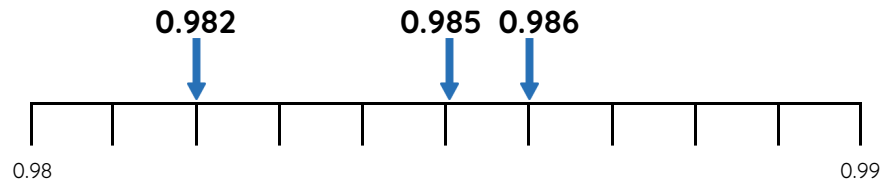
Fluency



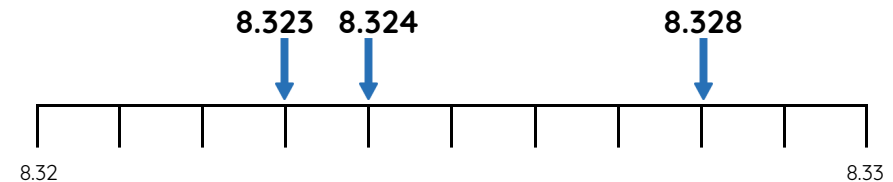
Master Nearest to and Furthest from with Thousandths

Fluency 4

Circle the numbers that complete each stem sentence.



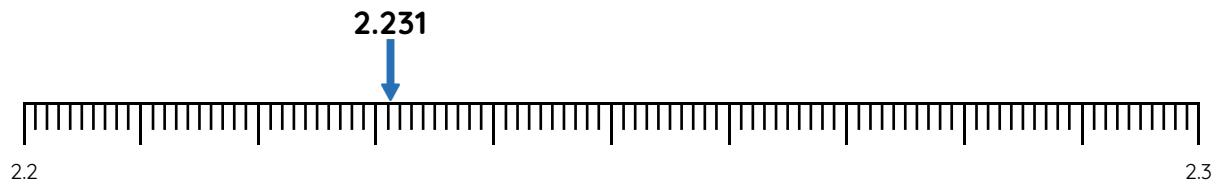
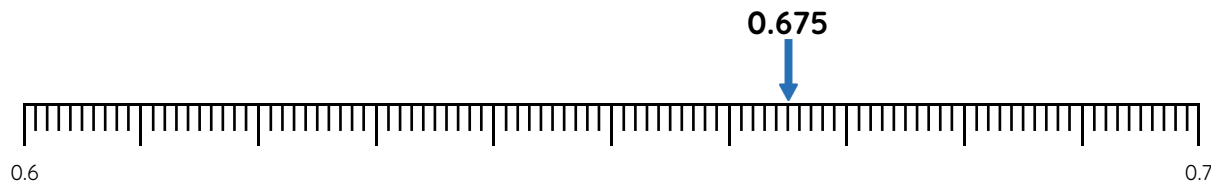
0.982 / 0.985 / 0.986 is furthest from 0.99



8.323 / 8.324 / 8.328 is nearest to 8.32

Fluency 5

Complete the stem sentences.



0.675 is ____ away from 0.6

0.675 is ____ away from 0.7

0.675 is further from **0.6 / 0.7** than **0.6 / 0.7**

2.231 is ____ away from 2.2

2.231 is ____ away from 2.3

2.231 is nearer to **2.2 / 2.3** than **2.2 / 2.3**

Reasoning, answers and teaching slides are available with a subscription.



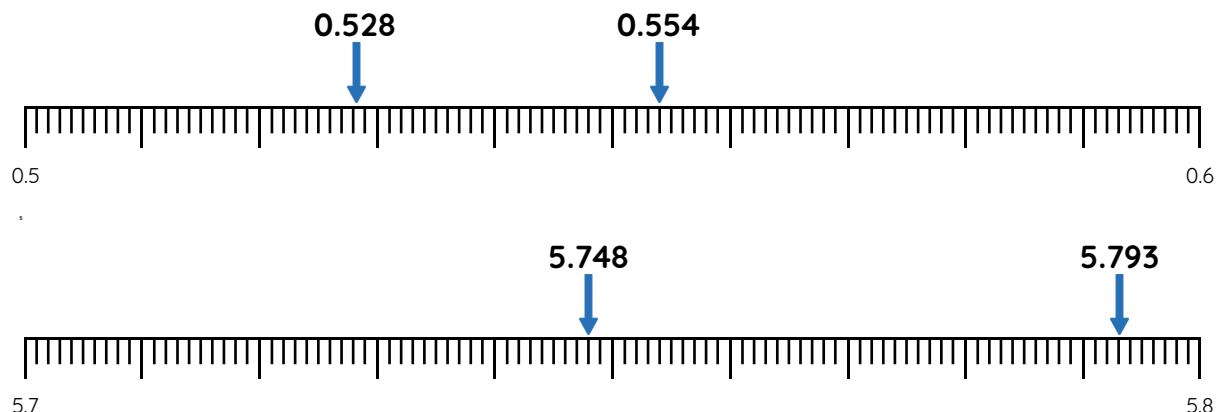
Fluency



Master Nearest to and Furthest from with Thousandths

Fluency 6

Circle the numbers that complete each stem sentence.

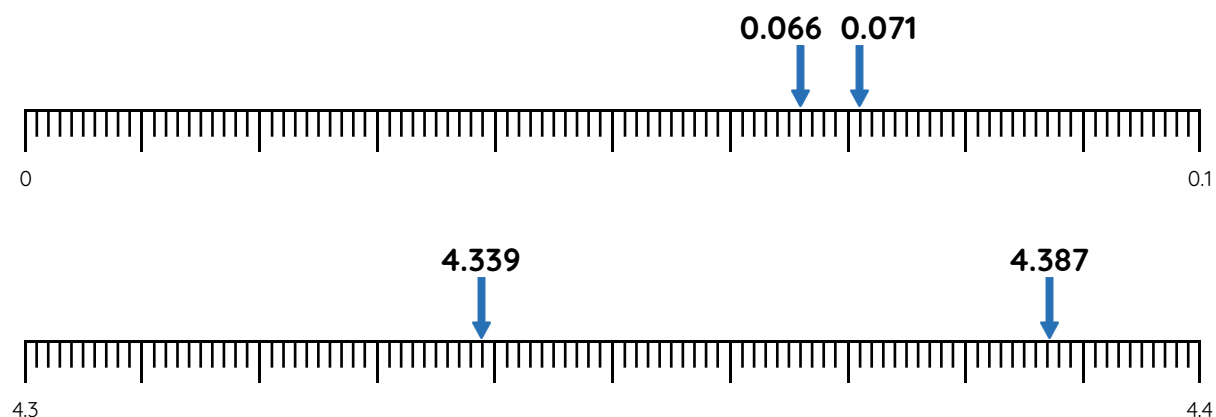


0.528 / 0.554 is nearest to 0.6

5.748 / 5.793 is furthest from 5.8

Fluency 7

Complete the stem sentences.



0.066 is ____ away from 0.07

0.071 is ____ away from 0.07

0.066 / 0.071 is nearest to 0.07

4.339 is ____ away from 4.36

4.387 is ____ away from 4.36

4.387 / 4.339 is furthest from 4.36

Reasoning, answers and teaching slides are available with a subscription.



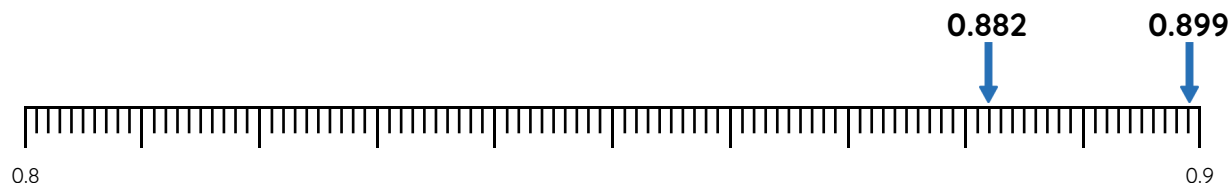
Fluency



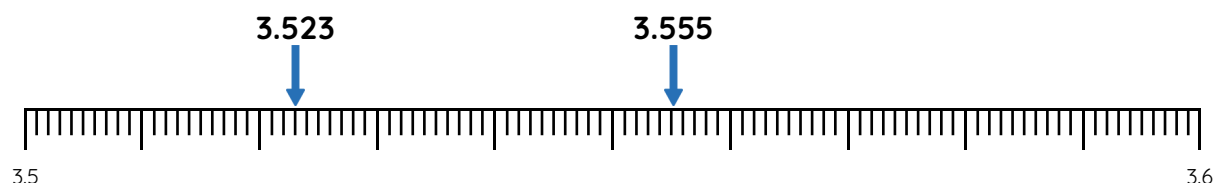
Master Nearest to and Furthest from with Thousandths

Fluency 8

Circle the numbers that complete each stem sentence.



0.882 / 0.899 is nearest to 0.89



3.523 / 3.555 is furthest from 3.54

Fluency 9

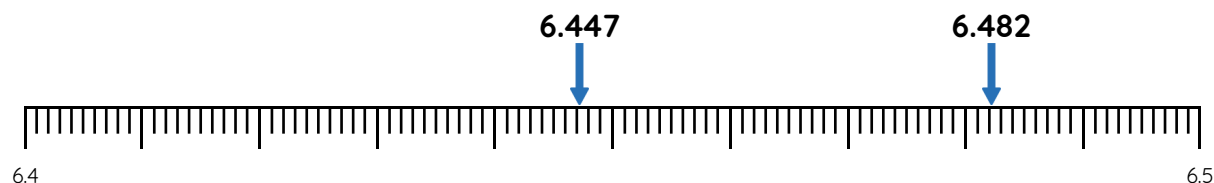
Complete the stem sentences.



0.968 is ____ away from 0.982

0.994 is ____ away from 0.982

0.968 / 0.994 is nearest to 0.982



6.447 is ____ away from 6.467

6.482 is ____ away from 6.467

6.447 / 6.482 is furthest from 6.467

Reasoning, answers and teaching slides are available with a subscription.



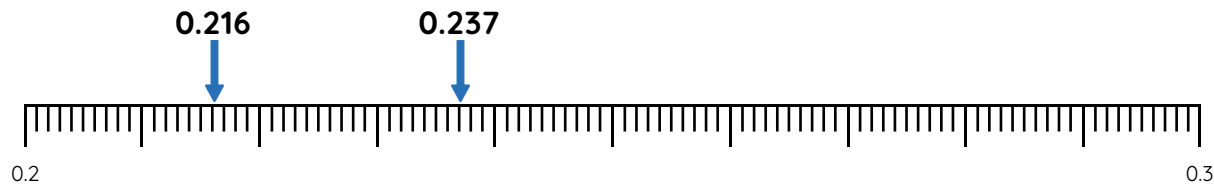
Fluency



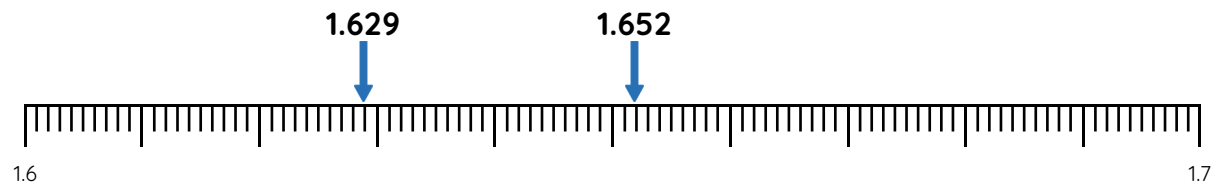
Master Nearest to and Furthest from with Thousandths

Fluency 10

Circle the numbers that complete each stem sentence.



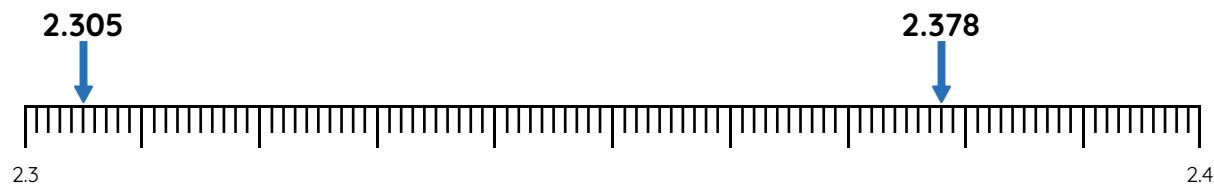
0.216 / 0.237 is furthest from 0.225



1.629 / 1.652 is nearest to 1.641

Fluency 11

Complete the stem sentences.



2.305 and _____ are an equal distance from 2.31

2.378 and _____ are an equal distance from 2.372

Reasoning, answers and teaching slides are available with a subscription.



Fluency



Master Nearest to and Furthest from with Thousandths

Fluency 12

Complete the stem sentences.

3.852 is ____ away from 3.8. 3.867 is ____ away from 3.8

3.852 / 3.867 is nearest to 3.8

7.181 is ____ away from 7.19. 7.194 is ____ away from 7.19

7.181 / 7.194 is furthest from 7.19

9.079 is ____ away from 9.08. 9.086 is ____ away from 9.08

9.079 / 9.086 is furthest from 9.08

Fluency 13

Circle the number that completes each stem sentence.

8.418 / 8.053 / 8.601 is furthest from 9

4.677 / 4.731 / 4.729 is nearest to 4.7

6.334 / 6.309 / 6.345 is nearest to 6.34

2.001 / 1.995 / 1.983 is furthest from 1.99

0.164 / 0.162 / 0.171 is furthest from 0.168

8.346 / 8.358 / 8.339 is nearest to 8.351

Fluency 12

Complete the stem sentences.

3.852 is ____ away from 3.8. 3.867 is ____ away from 3.8

3.852 / 3.867 is nearest to 3.8

7.181 is ____ away from 7.19. 7.194 is ____ away from 7.19

7.181 / 7.194 is furthest from 7.19

9.079 is ____ away from 9.08. 9.086 is ____ away from 9.08

9.079 / 9.086 is furthest from 9.08

Fluency 13

Circle the number that completes each stem sentence.

8.418 / 8.053 / 8.601 is furthest from 9

4.677 / 4.731 / 4.729 is nearest to 4.7

6.334 / 6.309 / 6.345 is nearest to 6.34

2.001 / 1.995 / 1.983 is furthest from 1.99

0.164 / 0.162 / 0.171 is furthest from 0.168

8.346 / 8.358 / 8.339 is nearest to 8.351



Master Nearest to and Furthest from with Thousandths

Fluency 14

Write the number that makes each stem sentence correct.

2.215 and 2.225 are an equal distance from _____

3.646 and 3.654 are an equal distance from _____

5.407 and 5.391 are an equal distance from _____

7.082 and _____ are an equal distance from 7

9.841 and _____ are an equal distance from 9.85

1.928 and _____ are an equal distance from 1.939

Fluency 14

Write the number that makes each stem sentence correct.

2.215 and 2.225 are an equal distance from _____

3.646 and 3.654 are an equal distance from _____

5.407 and 5.391 are an equal distance from _____

7.082 and _____ are an equal distance from 7

9.841 and _____ are an equal distance from 9.85

1.928 and _____ are an equal distance from 1.939

Fluency 14

Write the number that makes each stem sentence correct.

2.215 and 2.225 are an equal distance from _____

3.646 and 3.654 are an equal distance from _____

5.407 and 5.391 are an equal distance from _____

7.082 and _____ are an equal distance from 7

9.841 and _____ are an equal distance from 9.85

1.928 and _____ are an equal distance from 1.939

Fluency 14

Write the number that makes each stem sentence correct.

2.215 and 2.225 are an equal distance from _____

3.646 and 3.654 are an equal distance from _____

5.407 and 5.391 are an equal distance from _____

7.082 and _____ are an equal distance from 7

9.841 and _____ are an equal distance from 9.85

1.928 and _____ are an equal distance from 1.939

