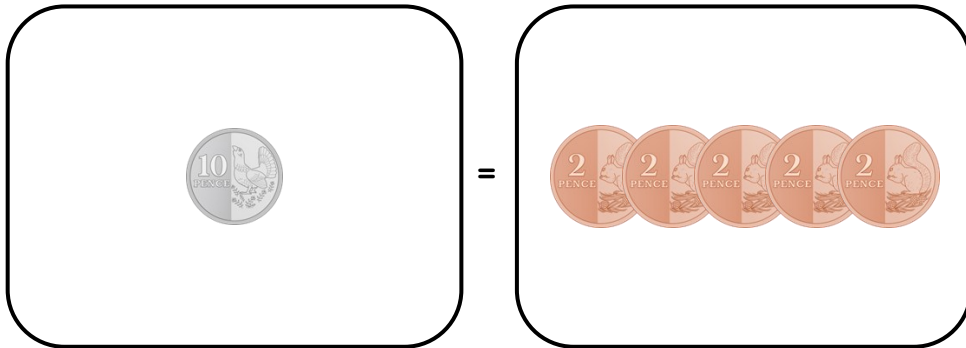


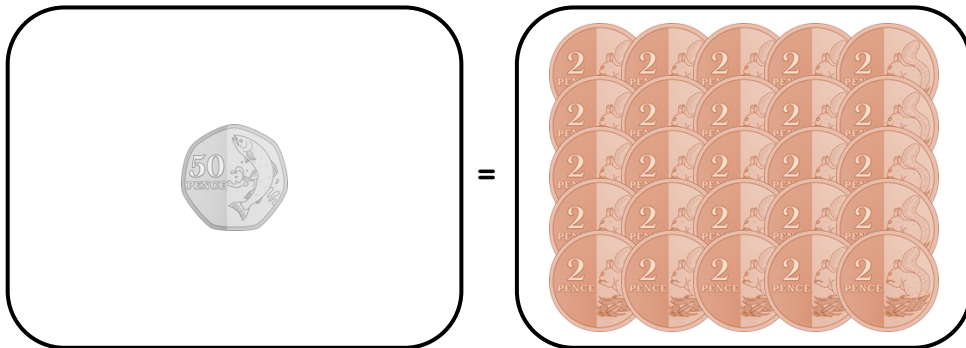
Master Equivalent Money in Pence

Fluency 1

Complete the stem sentences.



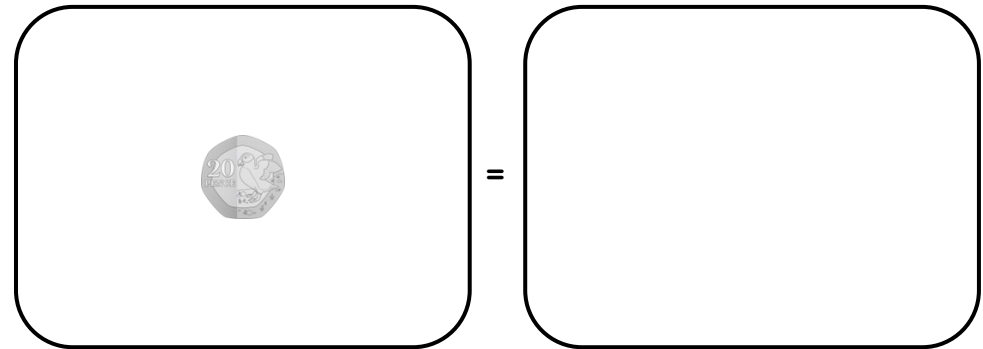
The value of a 10p coin is _____ 2p coins.



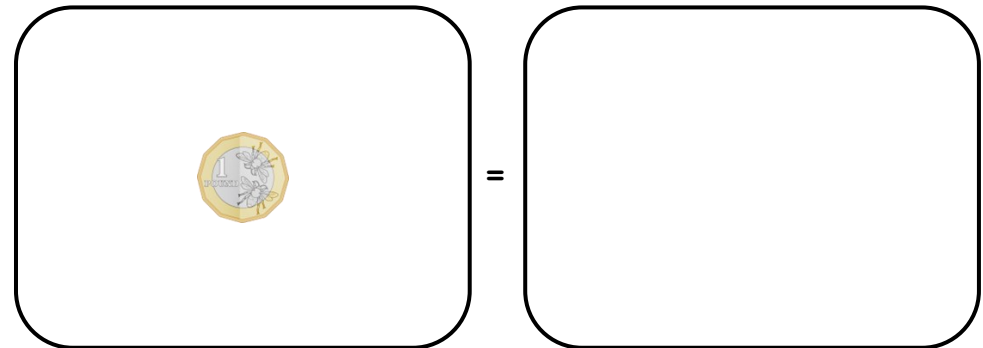
The value of a 50p coin is _____ 2p coins.

Fluency 2

Draw the correct number of 5p coins to represent the given values.



The value of a 20p coin is _____ 5p coins.



The value of a £1 coin is _____ 5p coins.

Reasoning, answers and teaching slides are available with a subscription.



Fluency



Master Equivalent Money in Pence

Fluency 3

Match the £1, 20p and £2 coins to their values.



Fluency 3

Match the £1, 20p and £2 coins to their values.



Fluency 4

Complete the stem sentences.

The value of a 50p coin is _____ 10p coins.

The value of a £1 coin is _____ 50p coins.

The value of a £2 coin is _____ 10p coins.

The value of a £2 coin is _____ 50p coins.

Fluency 4

Complete the stem sentences.

The value of a 50p coin is _____ 10p coins.

The value of a £1 coin is _____ 50p coins.

The value of a £2 coin is _____ 10p coins.

The value of a £2 coin is _____ 50p coins.

