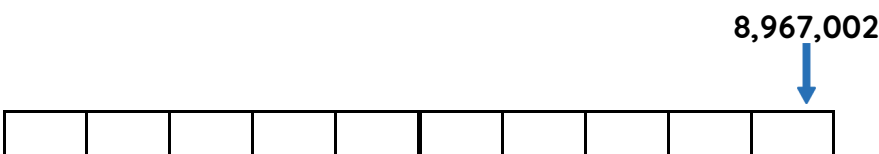
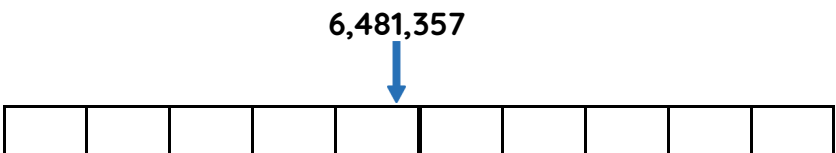
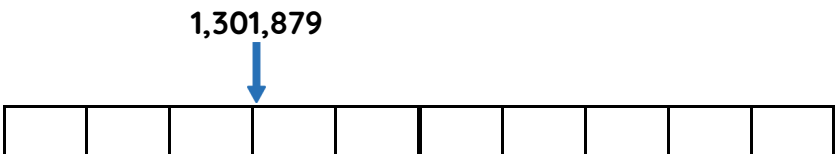
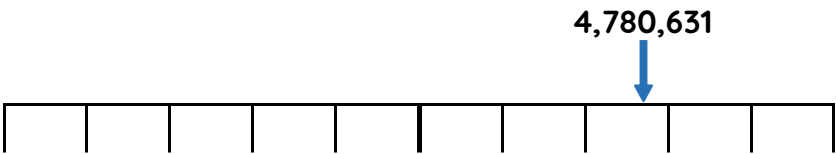


# Master Rounding within 10,000,000

## Fluency 1

Write the multiples used to round to the nearest 100,000 and 1,000,000



## Fluency 2

Complete the stem sentences using the numbers in F1

The multiples of 100,000 before and after \_\_\_\_\_ are \_\_\_\_\_ and \_\_\_\_\_. \_\_\_\_\_ rounded to the nearest 100,000 is \_\_\_\_\_

The multiples of 1,000,000 before and after \_\_\_\_\_ are \_\_\_\_\_ and \_\_\_\_\_. \_\_\_\_\_ rounded to the nearest 1,000,000 is \_\_\_\_\_

## Fluency 3

Complete the table.

Number	Nearest 100,000	Nearest 1,000,000
9,483,416		
3,020,791		
5,138,010		

Reasoning, answers and teaching slides are available with a subscription.

Fluency

# Master Rounding within 10,000,000

## Fluency 4

Complete the table.

Number	Nearest 10	Nearest 100	Nearest 1,000	Nearest 10,000	Nearest 100,000	Nearest 1,000,000
612,733						
9,956,448						
5,095,224						
2,914,005						

## Fluency 5

Write your own numbers to complete the stem sentences.

\_\_\_\_\_ rounds to **8,100,000** to the nearest 100,000 and **8,000,000** to the nearest 1,000,000

\_\_\_\_\_ rounds to **5,500,000** to the nearest 100,000 and **5,000,000** to the nearest 1,000,000

\_\_\_\_\_ rounds to **2,756,850** to the nearest 10 and **2,756,800** to the nearest 100

\_\_\_\_\_ rounds to **9,230,000** to the nearest 10,000 and **9,200,000** to the nearest 100,000

\_\_\_\_\_ rounds to **1,493,500** to the nearest 100 and **1,493,000** to the nearest 1,000

\_\_\_\_\_ rounds to **7,670,000** to the nearest 1,000 and to the nearest 10,000

Reasoning, answers and teaching slides are available with a subscription.



**Fluency**

