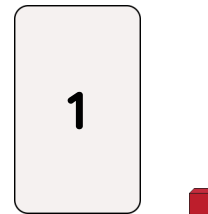




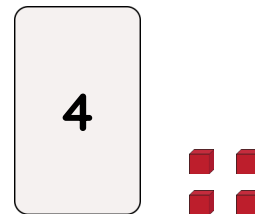


Master Ordering Number Representations to 10 B

Fluency 1




Complete the stem sentences.






_____ has fewer ones than _____ and _____



_____ has more ones than _____ and _____



_____ has fewer ones than _____ and _____



_____ has more ones than _____ and _____

Answers and teaching slides are available with a subscription.






Fluency





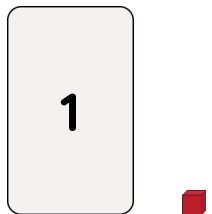
Master Ordering Number Representations to 10 B

Fluency 2


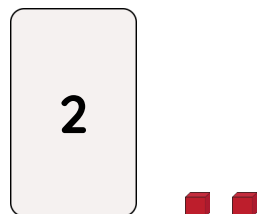

Complete the stem sentences.



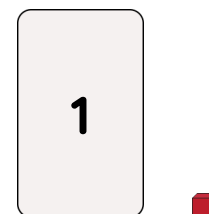


The smallest number is _____ and the greatest number is _____



The greatest number is _____ and the smallest number is _____



The smallest number is _____ and the greatest number is _____



The greatest number is _____ and the smallest number is _____

Answers and teaching slides are available with a subscription.



Fluency



Master Ordering Number Representations to 10 B

Fluency 3

Order the numbers from greatest to smallest.

4	2	7	_____, _____, _____
---	---	---	---------------------

Order the numbers from smallest to greatest.

10	5	8	_____, _____, _____
----	---	---	---------------------

Order the numbers from greatest to smallest.

6	3	9	_____, _____, _____
---	---	---	---------------------

Fluency 3

Order the numbers from greatest to smallest.

4	2	7	_____, _____, _____
---	---	---	---------------------

Order the numbers from smallest to greatest.

10	5	8	_____, _____, _____
----	---	---	---------------------

Order the numbers from greatest to smallest.

6	3	9	_____, _____, _____
---	---	---	---------------------

Answers and teaching slides are available with a subscription.



Fluency

