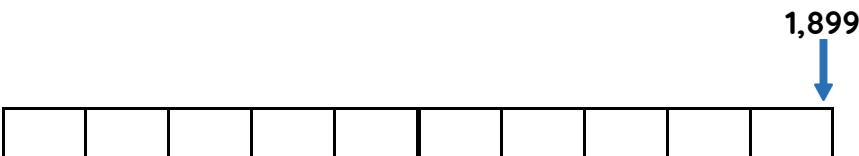
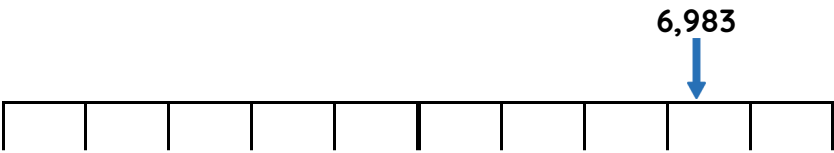
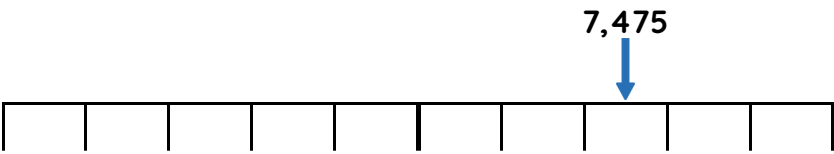
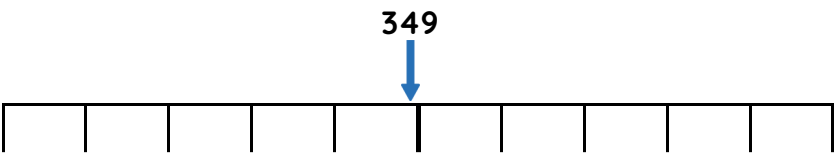


Master Rounding within 10,000

Fluency 1

Write the multiples used to round to the nearest 10 and 100



Fluency 2

Complete the stem sentences for each number in F1

The multiples of 10 before and after ____ are ____ and ____
____ rounded to the nearest 10 is ____

The multiples of 100 before and after ____ are ____ and ____
____ rounded to the nearest 100 is ____

Fluency 3

Complete the table.

| Number | Nearest 10 | Nearest 100 |
|--------|------------|-------------|
| 5,674 | | |
| 3,962 | | |
| 8,190 | | |

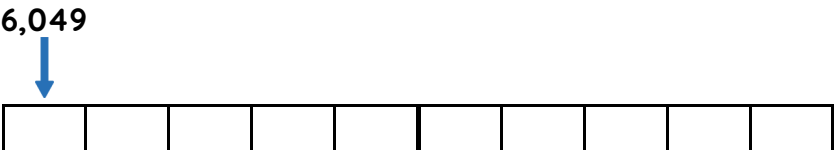
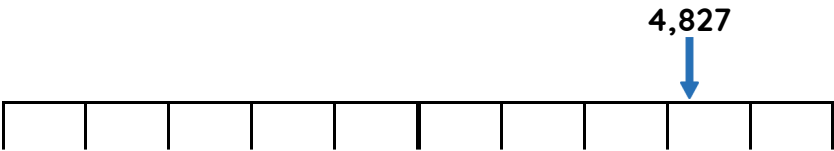
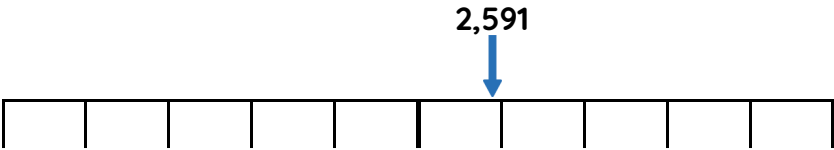
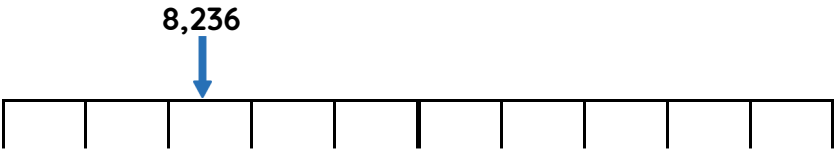
Reasoning, answers and teaching slides are available with a subscription.

Fluency

Master Rounding within 10,000

Fluency 4

Write the multiples used to round to the nearest 100 and 1,000



Fluency 5

Complete the stem sentences for each number in F4

The multiples of 100 before and after ____ are ____ and _____. ____ rounded to the nearest 10 is ____

The multiples of 1,000 before and after ____ are ____ and _____. ____ rounded to the nearest 1,000 is ____

Fluency 6

Complete the table.

| Number | Nearest 100 | Nearest 1,000 |
|--------|-------------|---------------|
| 5,380 | | |
| 688 | | |
| 9,952 | | |

Reasoning, answers and teaching slides are available with a subscription.



Master Rounding within 10,000

Fluency 7

Write the range of numbers which could complete the stem sentences.

_____ rounded to the nearest 10 is **3,190** and to the nearest 100 is **3,200**

_____ rounded to the nearest 10 is **1,750** and to the nearest 100 is **1,800**

_____ rounded to the nearest 10 is **4,010** and to the nearest 100 is **4,000**

_____ rounded to the nearest 100 is **2,200** to the nearest 1,000 is **2,000**

_____ rounded to the nearest 100 is **9,500** and to the nearest 1,000 is **9,000**

_____ rounded to the nearest 100 is **7,000** and to the nearest 1,000 is **7,000**

Fluency 7

Write the range of numbers which could complete the stem sentences.

_____ rounded to the nearest 10 is **3,190** and to the nearest 100 is **3,200**

_____ rounded to the nearest 10 is **1,750** and to the nearest 100 is **1,800**

_____ rounded to the nearest 10 is **4,010** and to the nearest 100 is **4,000**

_____ rounded to the nearest 100 is **2,200** to the nearest 1,000 is **2,000**

_____ rounded to the nearest 100 is **9,500** and to the nearest 1,000 is **9,000**

_____ rounded to the nearest 100 is **7,000** and to the nearest 1,000 is **7,000**

Reasoning, answers and teaching slides are available with a subscription.



Fluency

