

Master Choosing Appropriate Units of Measure 1

Fluency 1

Use the word bank to complete the stem sentences.

capacity

mass

length

height

volume

temperature

_____ is measured in grams and kilograms.

_____ and _____ are measured in millilitres and litres.

_____ is measured in degrees Celsius.

_____ and _____ are measured in centimetres and metres.

Fluency 2

Circle the most appropriate unit of measure to complete each stem sentence.

The length of the book bag is measured in **metres** / centimetres.

The height of the cupboard is measured in **metres** / centimetres.

Fluency 3

Circle the most appropriate unit of measure to complete each stem sentence.

The mass of the sack of potatoes is measured in **kilograms** / grams.

The mass of the packet of spaghetti is measured in **kilograms** / grams.

Fluency 4

Circle the most appropriate unit of measure to complete each stem sentence.

The volume of tea in the teacup is measured in **litres** / millilitres.

The capacity of the bucket is measured in **litres** / millilitres.

Reasoning, answers and teaching slides are available with a subscription.






Fluency



Master Choosing Appropriate Units of Measure 1


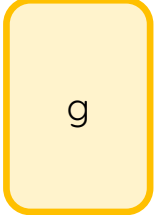

Fluency 5

Match the objects to the most appropriate units of measures.



Fluency 5

Match the objects to the most appropriate units of measures.



Reasoning, answers and teaching slides are available with a subscription.



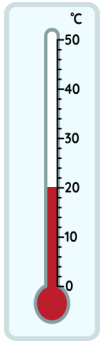
Fluency



Master Choosing Appropriate Units of Measure 1

Fluency 6

Tick the correct measurement and complete the stem sentence for each item.



20cm

20°C

20g

20ml

The temperature of the playground is ____.




2°C

2ml

2m

2kg

The height of the door is ____.



1 L

1kg

1m

1cm

The volume of olive oil in the bottle is ____.

Reasoning, answers and teaching slides are available with a subscription.

Fluency

