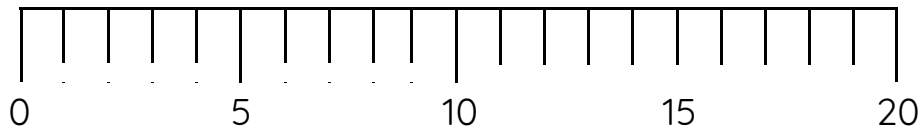


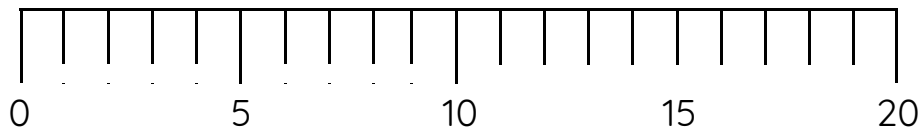
Master The Number Line to 20 B

Fluency 1

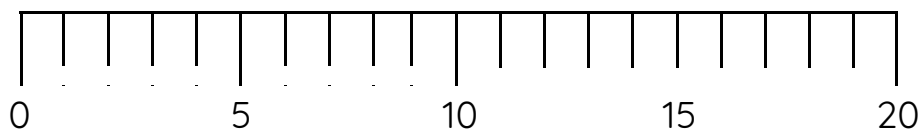
Position 14 onto the number line.



Position 8 onto the number line.

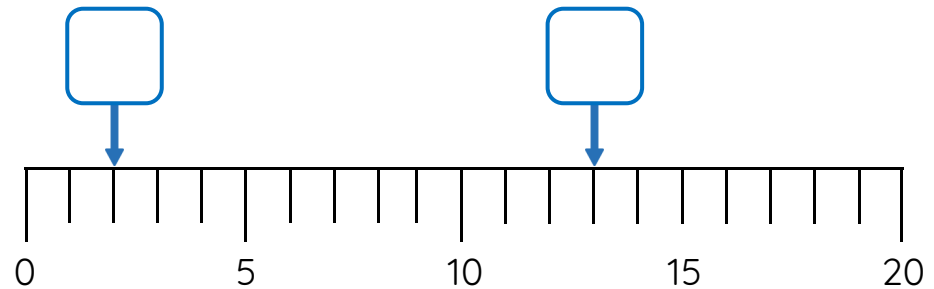


Position 17 onto the number line.



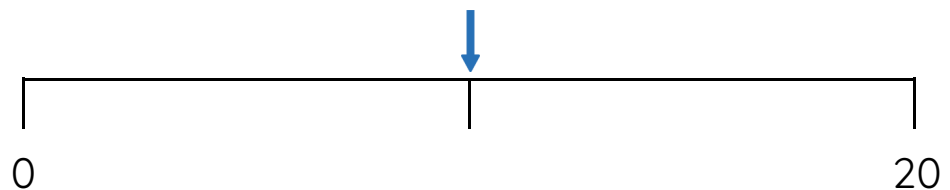
Fluency 2

Which numbers are here on the number line?



Fluency 3

What is the mid-point of the number line?



_____ is the mid-point.

Answers and teaching slides are available with a subscription.



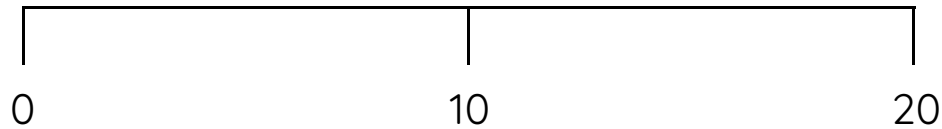
Fluency



Master The Number Line to 20 B

Fluency 4

Circle the numbers to complete the statements.



20 / 12 / 6 is between 0 and 10

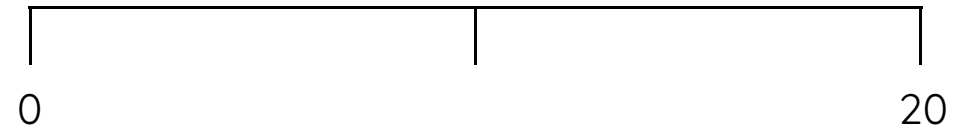
7 / 15 / 2 is between 10 and 20

19 is near to **0 / 10 / 20**

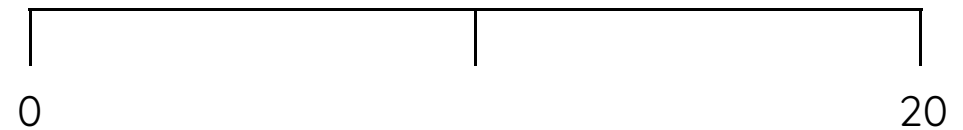
9 is near to **0 / 10 / 20**

Fluency 5

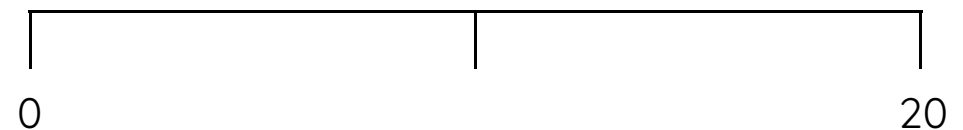
Position 11 onto the number line.



Position 4 onto the number line.



Position 18 onto the number line.



Answers and teaching slides are available with a subscription.



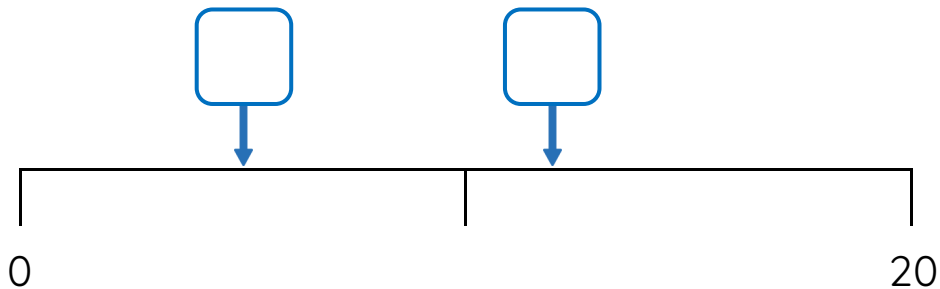
Fluency



Master The Number Line to 20 B

Fluency 6

Which numbers are here on the number line?



Fluency 7

Position 10 onto the number line.



Position 3 onto the number line.

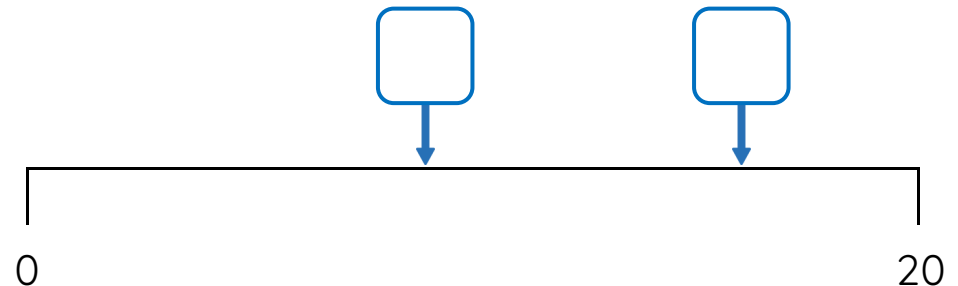


Position 15 onto the number line.



Fluency 8

Which numbers are here on the number line?



Answers and teaching slides are available with a subscription.

Fluency

