
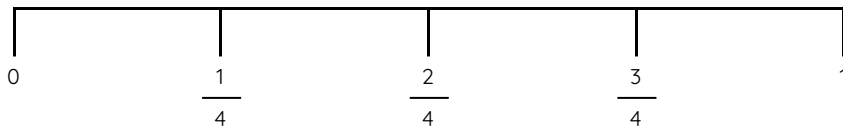
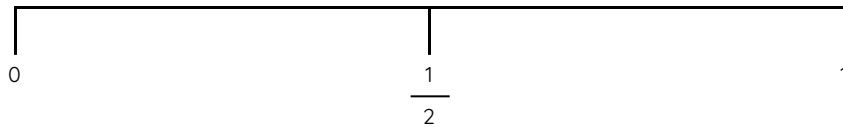


Master Recognising Halves, Quarters and Fifths in Decimal Form

Fluency 1

Use the number lines to complete the stem sentences.



1 half as a fraction is . 1 half as a decimal is ____ . ____

is equivalent to ____ . ____

1 quarter as a fraction is . 1 quarter as a decimal is ____ . ____

is equivalent to ____ . ____

1 fifth as a fraction is . 1 fifth as a decimal is ____ . ____

is equivalent to ____ . ____

Reasoning, answers and teaching slides are available with a subscription.



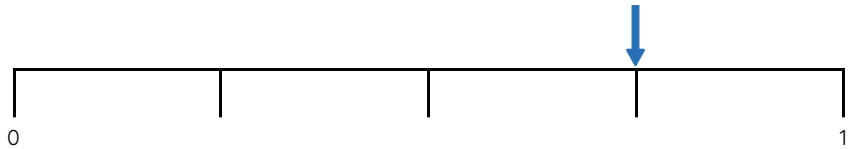
Fluency



Master Recognising Halves, Quarters and Fifths in Decimal Form

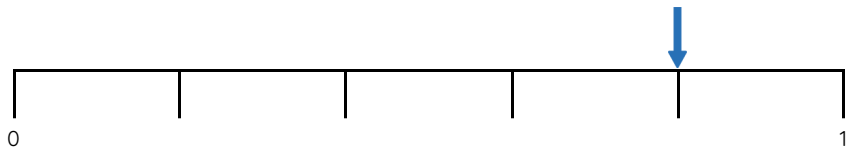
Fluency 2

Use the number lines to complete the stem sentences.



_____ as a fraction is . _____ as a

decimal is ____ . ____ . is equivalent to ____ . ____



_____ as a fraction is . _____ as a

decimal is ____ . ____ . is equivalent to ____ . ____

Fluency 3

Complete the stem sentences.

$\frac{2}{4}$ is equivalent to

$\frac{3}{5}$ is equivalent to

$\frac{2}{5}$ is equivalent to

0.25 is equivalent to

0.2 is equivalent to

0.5 is equivalent to

Reasoning, answers and teaching slides are available with a subscription.



Fluency

