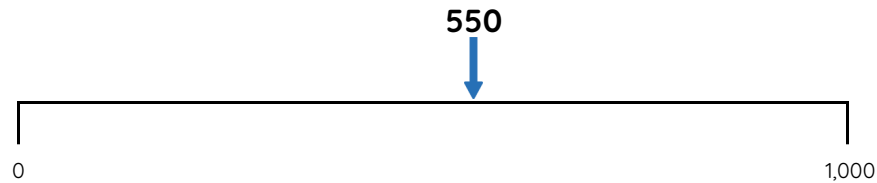


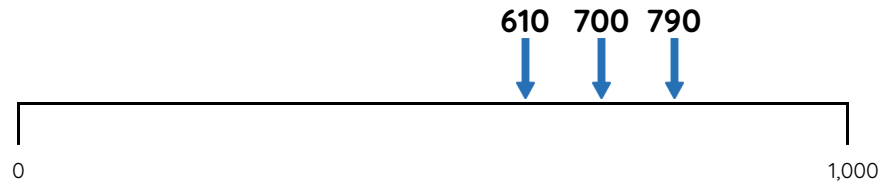
Master Nearest to / Furthest from to 1,000

Fluency 1

Circle the numbers that complete each stem sentence.



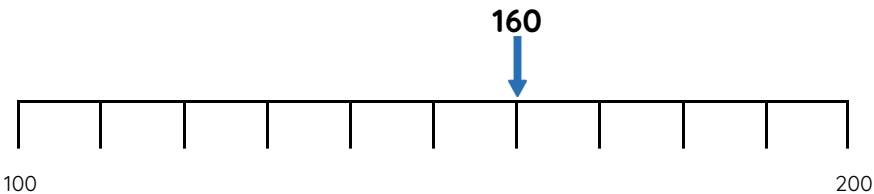
550 is nearer to **0 / 1,000** than **0 / 1,000**



610 / 700 / 790 is furthest from 0

Fluency 3

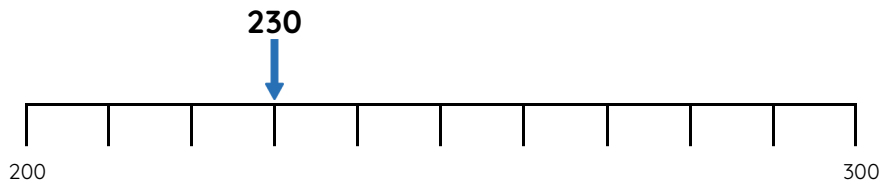
Circle the numbers that complete each stem sentence.



160 is nearer to **100 / 200** than **100 / 200**

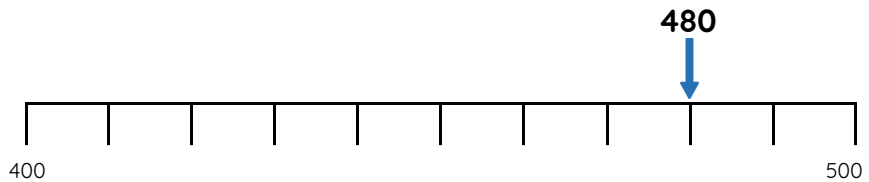
Fluency 2

Complete the stem sentences.



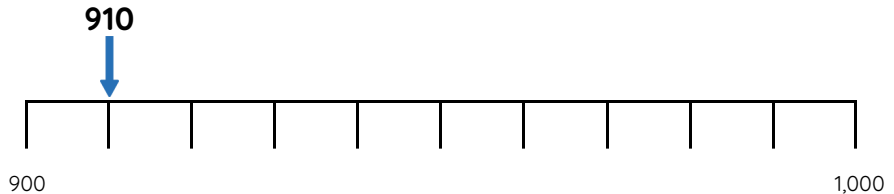
230 is ____ away from 200. 230 is ____ away from 300

230 is further from **200 / 300** than **200 / 300**



480 is ____ away from 400. 480 is ____ away from 500

480 is nearer to **400 / 500** than **400 / 500**



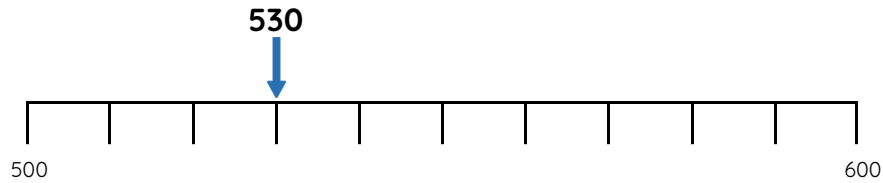
910 is further from **900 / 1,000** than **900 / 1,000**



Master Nearest to / Furthest from to 1,000

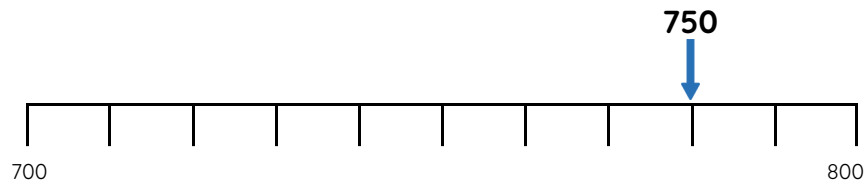
Fluency 4

Complete the stem sentences.



530 is ____ away from 520. 530 is ____ away from 580

530 is further from **520 / 580** than **520 / 580**

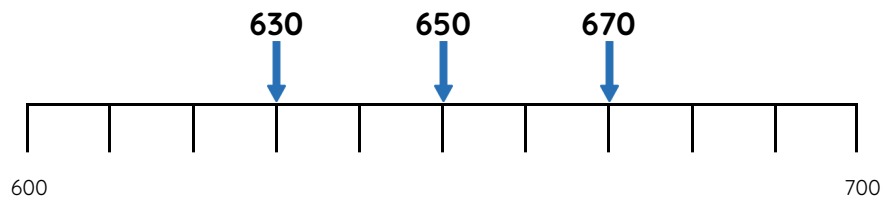


750 is ____ away from 730. 750 is ____ away from 790

750 is nearer to **730 / 790** than **730 / 790**

Fluency 6

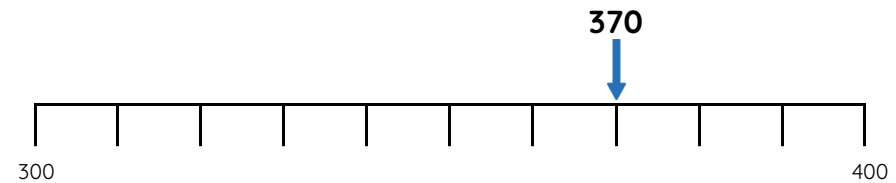
Write the number that completes each stem sentence.



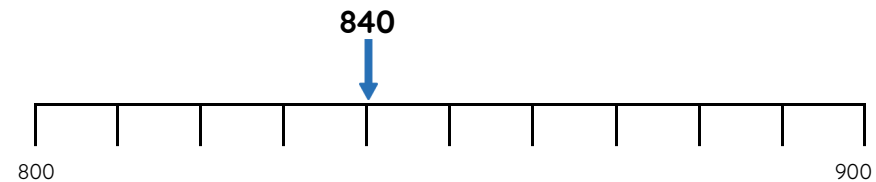
____ is furthest from 700

Fluency 5

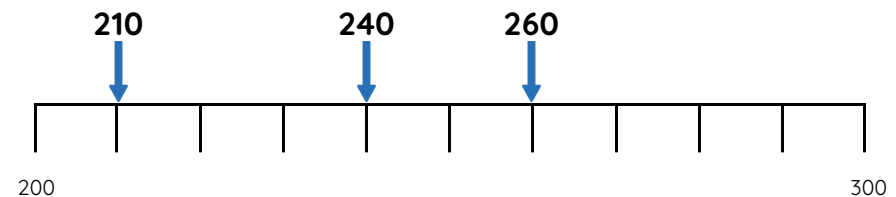
Circle the numbers that complete each stem sentence.



370 is nearer to **340 / 390** than **340 / 390**



840 is further from **810 / 890** than **810 / 890**



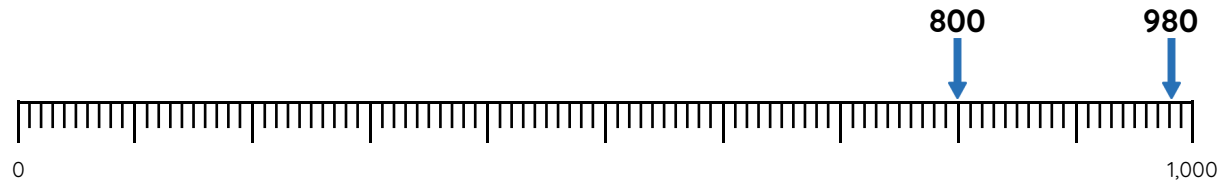
____ is nearest to 230



Master Nearest to / Furthest from to 1,000

Fluency 7

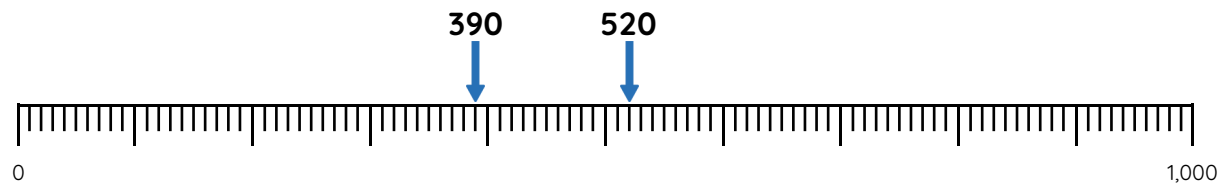
Complete the stem sentences.



800 is ____ away from 880

980 is ____ away from 880

800 / 980 is nearest to 880



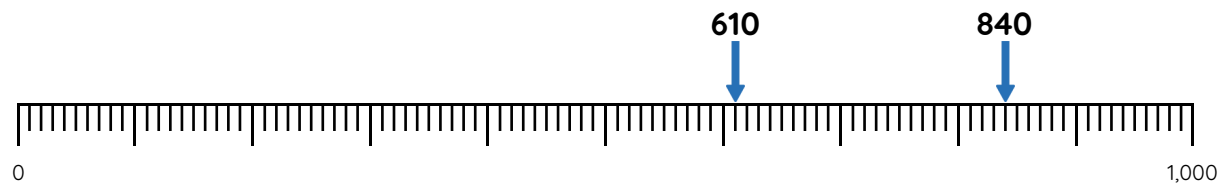
390 is ____ away from 450

520 is ____ away from 450

520 / 390 is furthest from 450

Fluency 8

Circle the number that completes each stem sentence.



610 / 840 is furthest from 700



80 / 220 is nearest to 160

Reasoning, answers and teaching slides are available with a subscription.



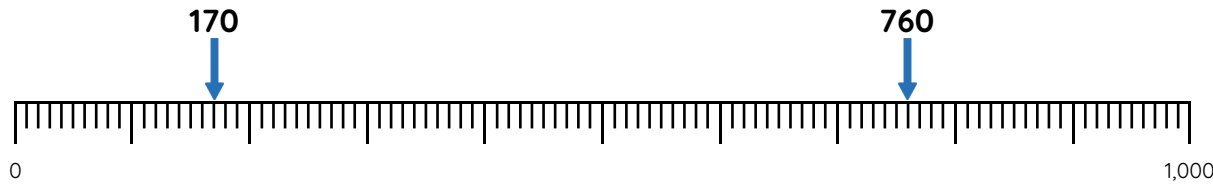
Fluency



Master Nearest to / Furthest from to 1,000

Fluency 9

Write the number that completes each stem sentence.



170 and _____ are an equal distance from 200

760 and _____ are an equal distance from 810

Fluency 10

Complete the stem sentences.

350 is _____ away from 400. 460 is _____ away from 400.

350 / **460** is nearest to 400

430 is _____ away from 520. 590 is _____ away from 520.

430 / **590** is furthest from 520

Fluency 11

Circle the number that makes each stem sentence correct.

220 / 190 / 170 is nearest to 200

1,000 / 850 / 990 is furthest from 920

130 / 120 / 140 is furthest from 150

Fluency 12

Write the number that makes each stem sentence correct.

560 and 640 are an equal distance from _____

80 and 140 are an equal distance from _____

920 and 1,000 are an equal distance from _____

470 and _____ are an equal distance from 400

780 and _____ are an equal distance from 800

320 and _____ are an equal distance from 350

