



# Master The Place Value of 3-Digit Numbers V1

## Fluency 1

Complete the stem sentences.



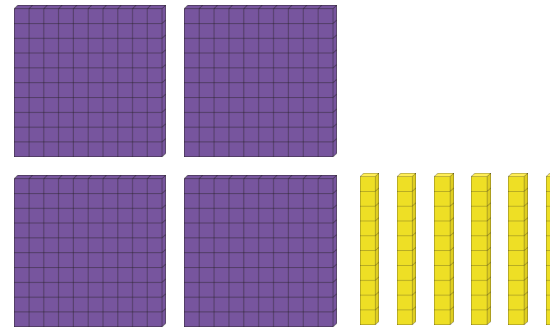
851 has \_\_\_\_ hundreds, \_\_\_\_ tens and \_\_\_\_ one.



605 has \_\_\_\_ hundreds and \_\_\_\_ ones.

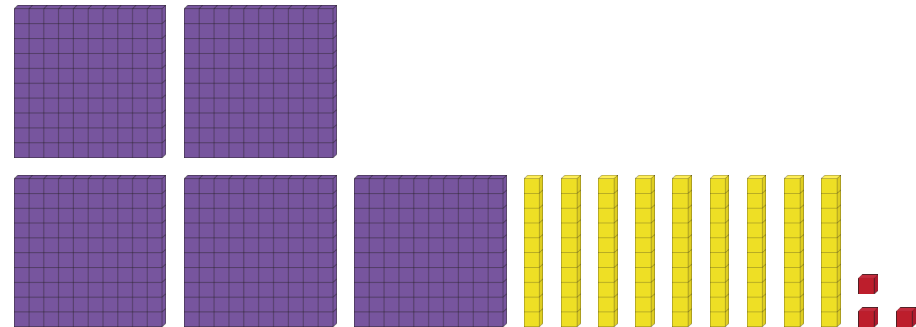
## Fluency 2

Complete the stem sentences.



\_\_\_\_ has \_\_\_\_ hundreds.

The value of the digit \_\_\_\_ is \_\_\_\_



\_\_\_\_ has \_\_\_\_ tens.

The value of the digit \_\_\_\_ is \_\_\_\_

Reasoning, problem solving, answers and teaching slides are available with a subscription.



Fluency



# Master The Place Value of 3-Digit Numbers V1

## Fluency 3

Complete the stem sentences.

100s	10s	1s
9	4	7

In \_\_\_\_\_, the value of the digit 7 is \_\_\_\_\_

100s	10s	1s
5	1	6

In \_\_\_\_\_, the value of the digit 5 is \_\_\_\_\_

## Fluency 4

Write the value of the underlined digits.

2 <u>6</u> 4	
<u>9</u> 08	
87 <u>2</u>	

## Fluency 3

Complete the stem sentences.

100s	10s	1s
9	4	7

In \_\_\_\_\_, the value of the digit 7 is \_\_\_\_\_

100s	10s	1s
5	1	6

In \_\_\_\_\_, the value of the digit 5 is \_\_\_\_\_

## Fluency 4

Write the value of the underlined digits.

2 <u>6</u> 4	
<u>9</u> 08	
87 <u>2</u>	

