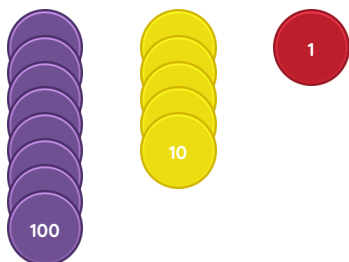


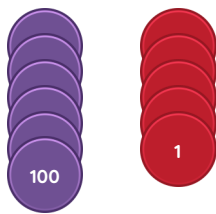
Master The Place Value of 3-Digit Numbers V2

Fluency 1

Complete the stem sentences.



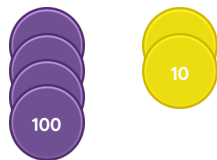
851 has ____ hundreds,
____ tens and ____ one.



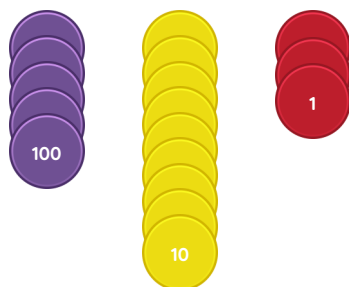
605 has ____ hundreds and
____ ones.

Fluency 2

Complete the stem sentences.



____ has ____ hundreds.
The value of the digit ____ is



____ has ____ tens.
The value of the digit ____ is

Fluency 3

Complete the stem sentence.

100	200	300	400	500	600		800	900
10	20	30	40	50	60	70	80	90
1	2	3	4	5	6	7	8	

709 has ____ hundreds and ____ ones.

Fluency 4

Complete the stem sentences.

100	200		400	500		700	800	900
10	20	30	40		60	70		90
1	2		4	5	6	7	8	9

350 has ____ hundreds.

The value of the digit ____ is ____

____ has ____ tens.

The value of the digit ____ is ____

Reasoning, problem solving, answers and
teaching slides are available with a subscription.



Fluency



Master The Place Value of 3-Digit Numbers V2

Fluency 5

Complete the stem sentences.

100s	10s	1s
9	4	7

In _____, the value of the digit 7 is _____

100s	10s	1s
5	1	6

In _____, the value of the digit 5 is _____

Fluency 6

Write the value of the underlined digits.

2 <u>6</u> 4	
<u>9</u> 08	
87 <u>2</u>	

Fluency 5

Complete the stem sentences.

100s	10s	1s
9	4	7

In _____, the value of the digit 7 is _____

100s	10s	1s
5	1	6

In _____, the value of the digit 5 is _____

Fluency 6

Write the value of the underlined digits.

2 <u>6</u> 4	
<u>9</u> 08	
87 <u>2</u>	

