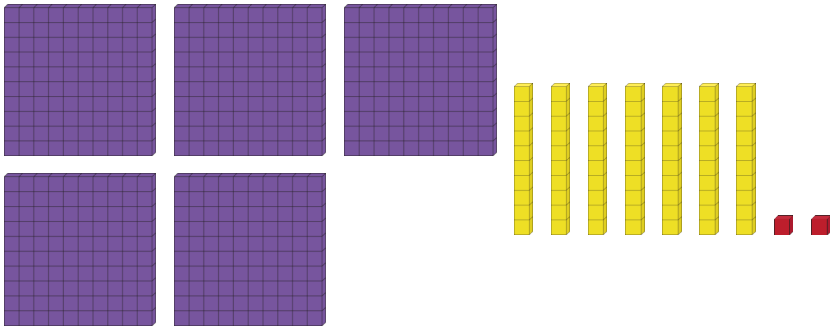


Master 1, 10 and 100 More

Fluency 1


Complete the stem sentences.



1 more than 572 is _____

10 more than 572 is _____

100 more than 572 is _____



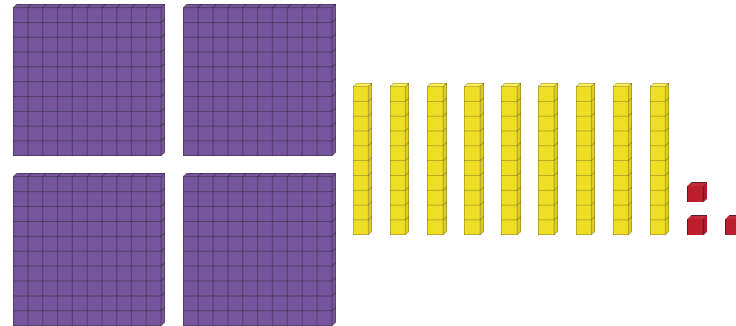
1 more than 806 is _____

10 more than 806 is _____

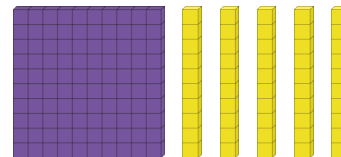
100 more than 806 is _____

Fluency 2


Complete the stem sentences.



10 more than _____ is _____



100 more than _____ is _____



1 more than _____ is _____



Master 1, 10 and 100 More

Fluency 3

Complete the stem sentences.

100s	10s	1s
2	4	4

10 more than 244 is _____

100s	10s	1s
7	6	9

1 more than 769 is _____

100s	10s	1s
3	8	1

100 more than 381 is _____

Fluency 4

Write the missing numbers.

1 more

903

100 more

612

10 more

431

100 more

756

Fluency 5

Complete the stem sentences.

529 is _____ more than 429

663 is _____ more than 653

991 is _____ more than 990

Fluency 6

Complete the stem sentences.

274 is 10 more than _____

705 is 1 more than _____

137 is 100 more than _____

Reasoning, answers and teaching slides are available with a subscription.



Fluency

