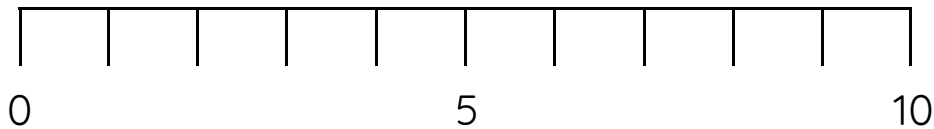


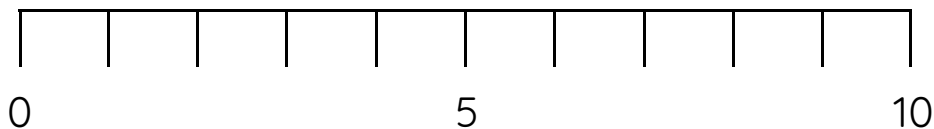
Master The Number Line to 10 B

Fluency 1

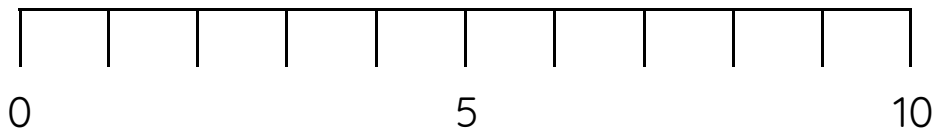
Position 4 onto the number line.



Position 7 onto the number line.

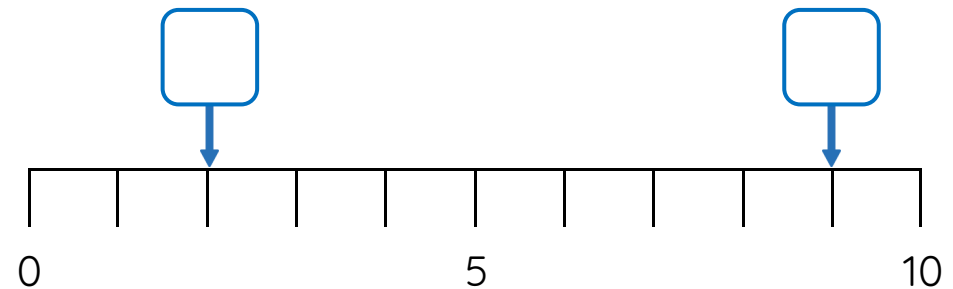


Position 1 onto the number line.



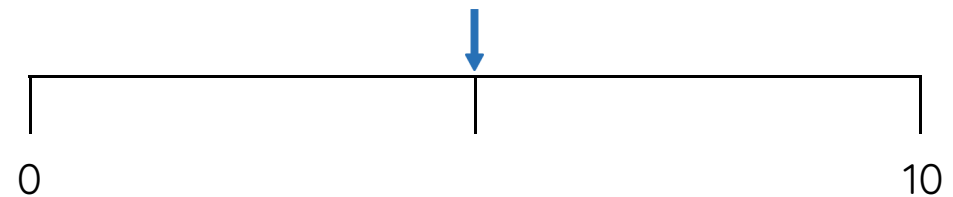
Fluency 2

Which numbers are here on the number line?



Fluency 3

What is the mid-point of the number line?



_____ is the mid-point.

Answers and teaching slides are available with a subscription.



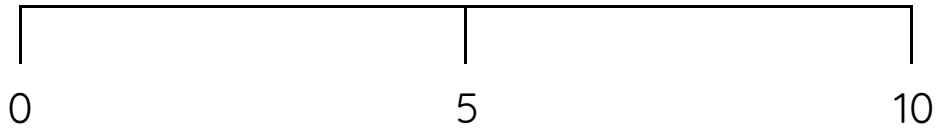
Fluency



Master The Number Line to 10 B

Fluency 4

Circle the numbers to complete the statements.



6 / 3 / 8 is between 0 and 5

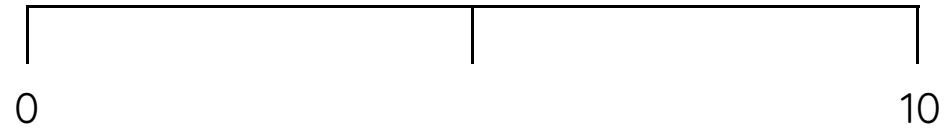
2 / 4 / 7 is between 5 and 10

9 is near to **0 / 5 / 10**

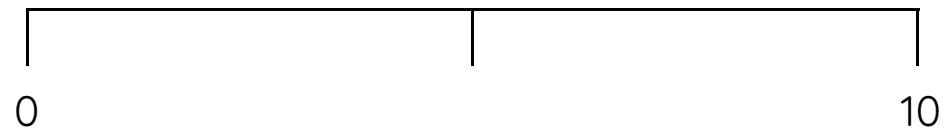
1 is near to **0 / 5 / 10**

Fluency 5

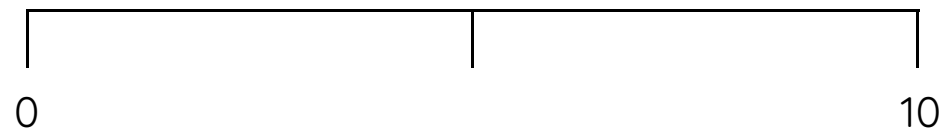
Position 8 onto the number line.



Position 1 onto the number line.



Position 4 onto the number line.



Answers and teaching slides are available with a subscription.



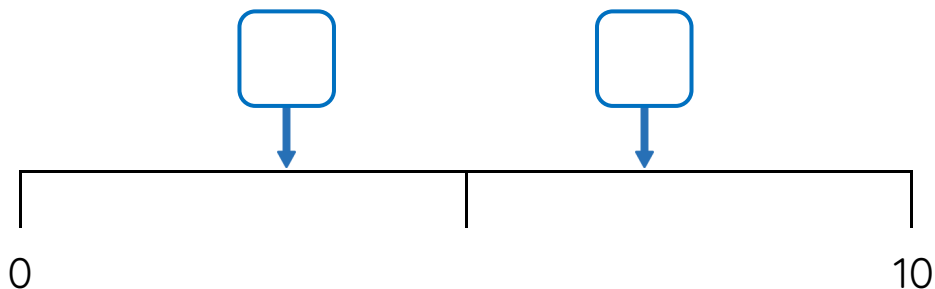
Fluency



Master The Number Line to 10 B

Fluency 6

Which numbers are here on the number line?



Fluency 7

Position 6 onto the number line.



Position 5 onto the number line.

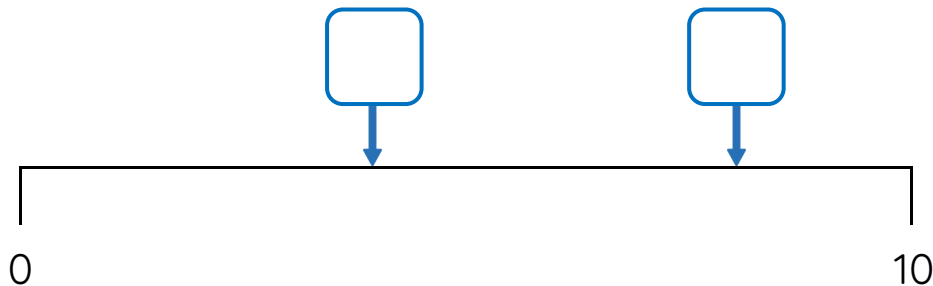


Position 2 onto the number line.



Fluency 8

Which numbers are here on the number line?



Answers and teaching slides are available with a subscription.



Fluency

