


Master Ordering Number Representations to 10 A


Step 1

Make 3 numbers to 10 using Dienes.
Put each of them on a plate.



Step 2


Use the stem sentences to say...
___ has the **most** / **least** ones. The greatest
number is ___ and the smallest number is ___



6 has the most ones. 2 has
the least ones. The
greatest number is 6 and
the smallest number is 2


Step 3

Move the plates to order the numbers from
smallest to greatest.



Step 4

Now, move the plates to order them from greatest
to smallest. Did you need to move all of them?



Repeat the task with 3 new numbers. What do you notice?

