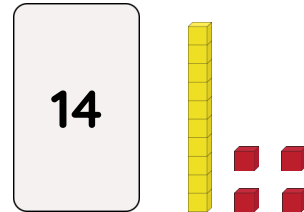
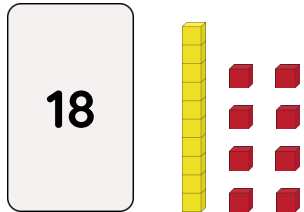


Master Comparing Number Representations to 20 B

Fluency 1

Compare the numbers.

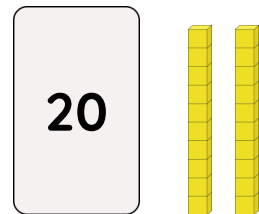
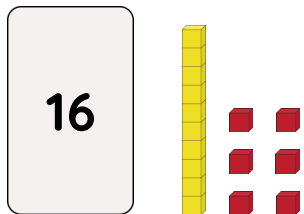


They each have ____ ten.

____ has ____ ones and ____ has ____ ones.

____ has more ones than ____

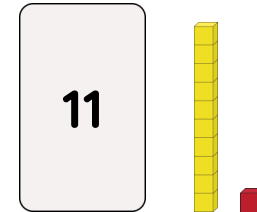
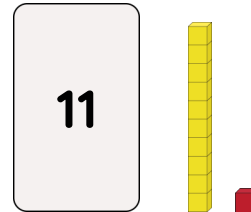
____ is greater than ____



____ has ____ ten and ____ has ____ tens.



____ has fewer tens than ____

____ is less than ____



They each have ____ ten and ____ one.

____ is equal to ____



____ has ____ ten and ____ has ____ tens.

____ is greater than ____

Reasoning, answers and teaching slides are available with a subscription.



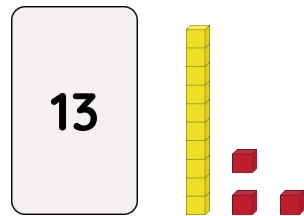
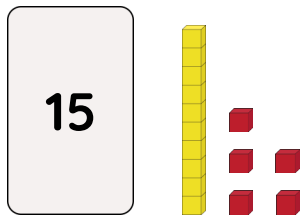
Fluency



Master Comparing Number Representations to 20 B

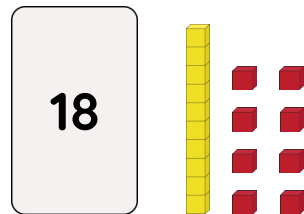
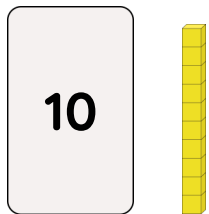
Fluency 2

Circle the correct words to compare the numbers.



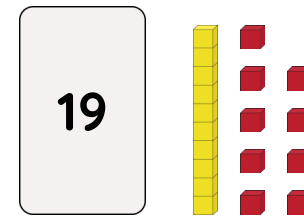
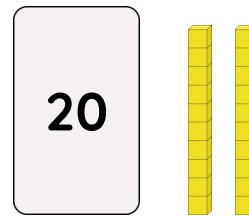
15 has **fewer** / **more ones** / **tens** than 13

15 is **less than** / **greater than** 13



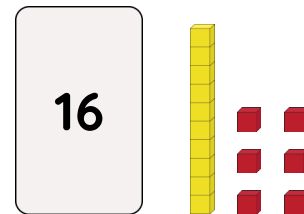

10 has **no ones** / **tens**.

10 is **less than** / **greater than** 18



20 has **fewer** / **more ones** / **tens** than 19

20 is **less than** / **greater than** 19



4 has **no ones** / **tens**.

4 is **less than** / **greater than** 16

Reasoning, answers and teaching slides are available with a subscription.



Fluency



Master Comparing Number Representations to 20 B

Fluency 3

Complete the stem sentences.

14

19

_____ is less than _____

12

20

_____ is less than _____

17

17

_____ is equal to _____

11

5

_____ is greater than _____



Fluency 3

Complete the stem sentences.

14

19

_____ is less than _____

12

20

_____ is less than _____

17

17

_____ is equal to _____

11

5

_____ is greater than _____

Reasoning, answers and teaching slides are available with a subscription.



Fluency