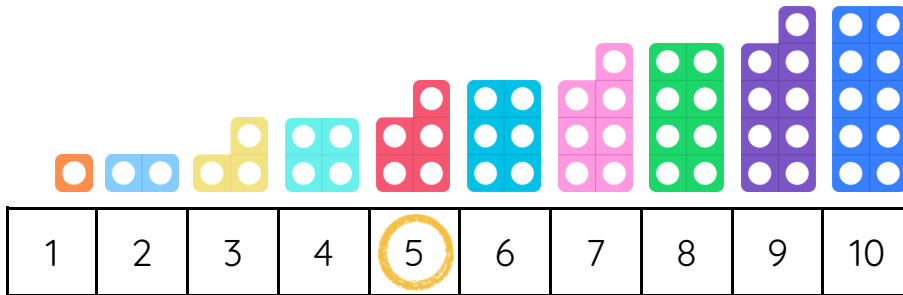


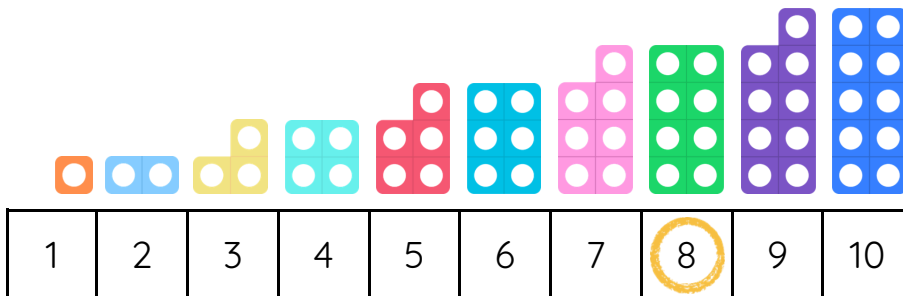
Master 1 Less to 10 B

Fluency 1

Use the Numicon and number tracks to find 1 less.



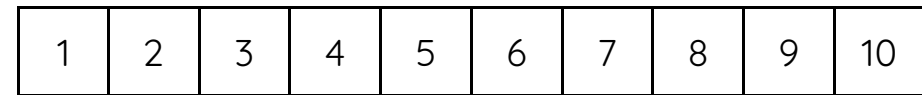
1 less than 5 is _____



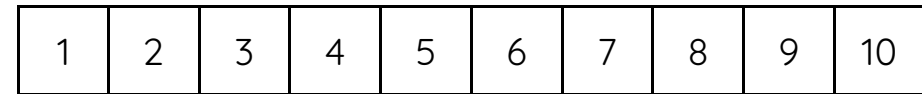
1 less than _____ is _____

Fluency 2

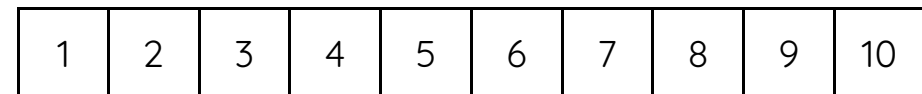
Use the number tracks to find 1 less.



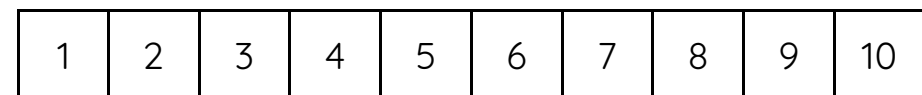
1 less than 2 is _____



1 less than 10 is _____



1 less than 6 is _____



1 less than 9 is _____

Answers and teaching slides are available with a subscription.

Fluency



Master 1 Less to 10 B

Fluency 3

Complete the stem sentences.

3

_____ is 1 less than 3

7

_____ is 1 less than 7

4

_____ is 1 less than 4

1

_____ is 1 less than 1

Fluency 4

Write the numbers to show 1 less.

8

4

6

9

10

2

3

5

7

1

Answers and teaching slides are available with a subscription.

Fluency

