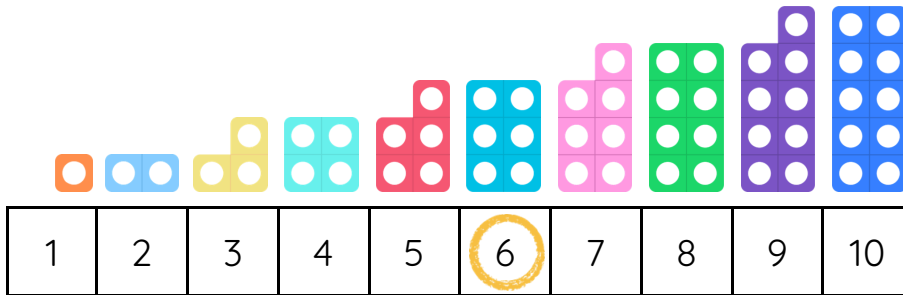


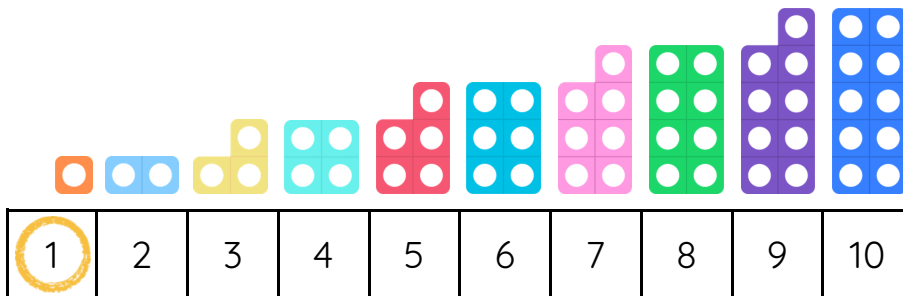
Master 1 More to 10 B

Fluency 1

Use the Numicon and number tracks to find 1 more.



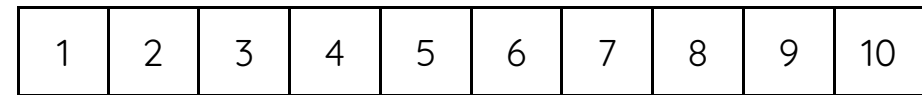
1 more than 6 is _____



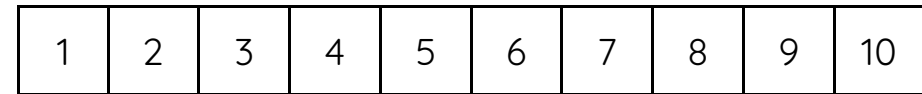
1 more than _____ is _____

Fluency 2

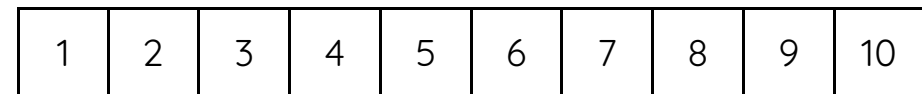
Use the number tracks to find 1 more.



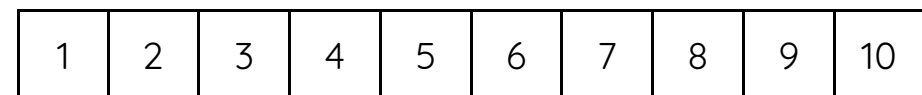
1 more than 9 is _____



1 more than 3 is _____



1 more than 7 is _____



1 more than 4 is _____

Answers and teaching slides are available with a subscription.



Fluency



Master 1 More to 10 B

Fluency 3

Complete the stem sentences.

2

_____ is 1 more than 2

8

_____ is 1 more than 8

5

_____ is 1 more than 5

0

_____ is 1 more than 0

Fluency 4

Write the numbers to show 1 more.

9

7

4

5

1

3

8

2

6

0

