


Master Comparing Number Representations to 10 B

Fluency 1


Compare the numbers.



There are ____ ones. There are ____ ones.

____ has fewer ones than ____

____ is less than ____



They each have ____ ones.

____ is equal to ____


Fluency 2

Circle the correct words to compare the numbers.



6 has **fewer / more** ones than 2

6 is **less than / greater than** 2



4 has **fewer / more** ones than 10

4 is **less than / greater than** 10



Master Comparing Number Representations to 10 B

Fluency 3

Complete the stem sentences.

8

1

_____ is greater than _____

3

6

_____ is less than _____

7

7

_____ is equal to _____

5

9

_____ is greater than _____

Fluency 3

Complete the stem sentences.

8

1

_____ is greater than _____

3

6

_____ is less than _____

7

7

_____ is equal to _____

5

9

_____ is greater than _____

