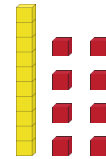
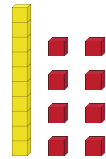
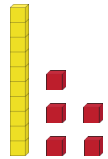


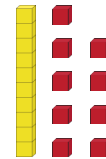
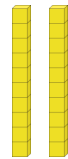

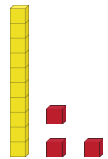
Master Ordering Number Representations to 20 B

Fluency 1

Complete the stem sentences.



They each have ____ ten. ____ has fewer ones than ____ and _____. ____ has fewer ones than _____. The smallest number is ____ and the greatest number is ____.



____ has more tens than ____ and _____. ____ has more ones than _____. The greatest number is ____ and the smallest number is ____.

Answers and teaching slides are available with a subscription.




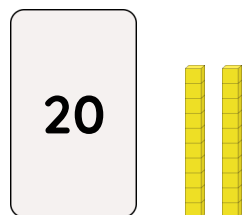
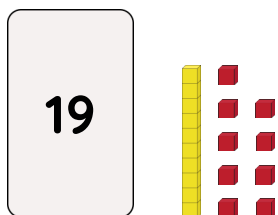
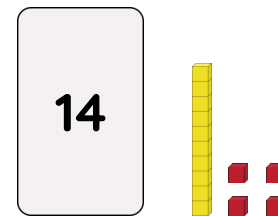
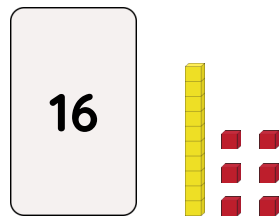
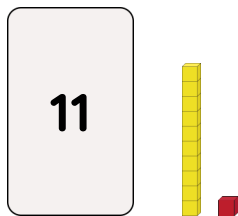
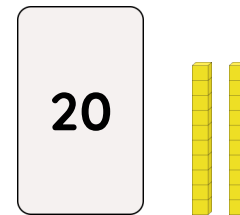
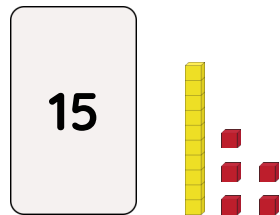
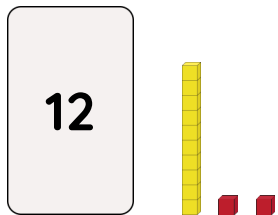
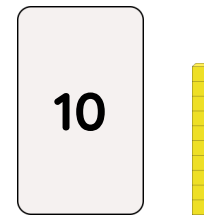
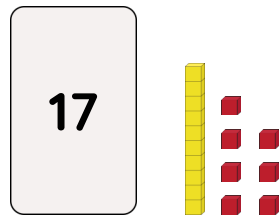
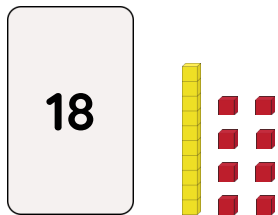
Fluency



Master Ordering Number Representations to 20 B

Fluency 2

Complete the stem sentences.



The greatest number is _____ and the smallest number is _____

The greatest number is _____ and the smallest number is _____

The greatest number is _____ and the smallest number is _____

The greatest number is _____ and the smallest number is _____

Answers and teaching slides are available with a subscription.



Fluency



Master Ordering Number Representations to 20 B

Fluency 3

Order the numbers from greatest to smallest.

10

17

12

_____, _____, _____

16

4

13

_____, _____, _____

Order the numbers from smallest to greatest.

14

0

18

_____, _____, _____

15

20

11

_____, _____, _____

Fluency 3

Order the numbers from greatest to smallest.

10

17

12

_____, _____, _____

16

4

13

_____, _____, _____

Order the numbers from smallest to greatest.

14

0

18

_____, _____, _____

15

20

11

_____, _____, _____

Answers and teaching slides are available with a subscription.



Fluency

