



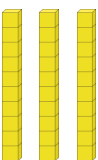
Master The Place Value of 2-Digit Numbers

Fluency 1

Complete the stem sentences.

10s	1s
	

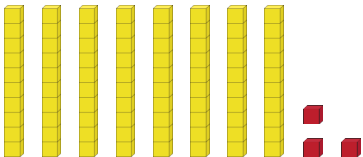
_____ has _____ tens and _____ ones.

10s	1s
	


_____ has _____ tens.

Fluency 2

Complete the stem sentences.



_____ has _____ tens and _____ ones.



_____ has _____ tens.

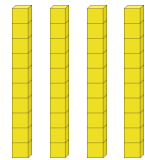

The value of the digit _____ is _____

_____ has _____ ones.

The value of the digit _____ is _____



Fluency 3

Complete the stem sentences.

10s	1s
	

_____ has _____ tens.

The value of the digit _____ is _____

10s	1s
	

_____ has _____ ones.

The value of the digit _____ is _____

Reasoning, problem solving, answers and teaching slides are available with a subscription.



Fluency



Master The Place Value of 2-Digit Numbers

Fluency 4

Complete the stem sentences.

10s	1s
9	8

In _____, the value of the digit 9 is _____

10s	1s
7	1

In _____, the value of the digit 1 is _____

10s	1s
5	0

In _____, the value of the digit 5 is _____

Fluency 4

Complete the stem sentences.

10s	1s
9	8

In _____, the value of the digit 9 is _____

10s	1s
7	1

In _____, the value of the digit 1 is _____

10s	1s
5	0

In _____, the value of the digit 5 is _____

