

# Master Comparing 2-Digit Number Representations

## Task 1

Represent the numbers using straws and say the stem sentence.

83

38

\_\_\_ has more / fewer tens / ones than \_\_\_

## Task 2

Represent each pair of numbers in a place value chart with Dienes and say the stem sentence.

21 and 12

40 and 4

\_\_\_ is greater / less than \_\_\_

## Task 3

Represent the numbers with Dienes.

77

92

26

39


How many ways can you compare two different representations?

## Task 4

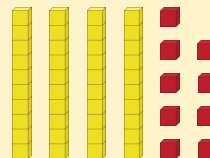
Prove whether the statement is true or false.

B is greater than A because there are more Dienes.

A

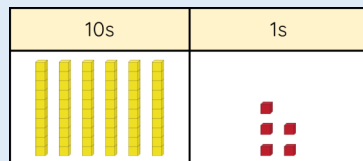


B




## Task 5

How can you make the representation correct?

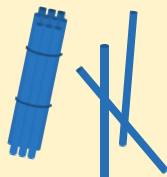


is equal to



## Task 6

Represent a pair of numbers where a 2-digit number is less than another 2-digit number but it has more ones.



10s	1s

