

Master 1 Less to 100 A


Step 1

Pick a number card.




Step 2

Show this number using Dienes.



Step 3


Remove a ones Dienes block to show one less.



Step 4

Say the stem sentence...

1 less than ____ is ____



1 less than 74 is 73

Repeat the task using a different number card.

