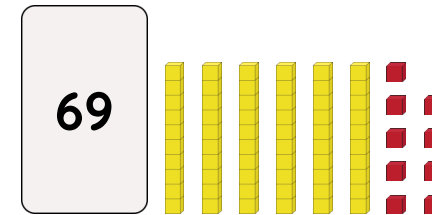
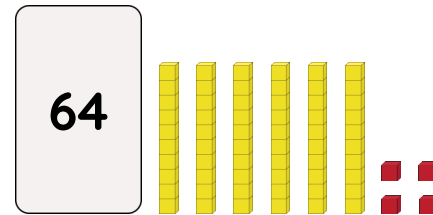
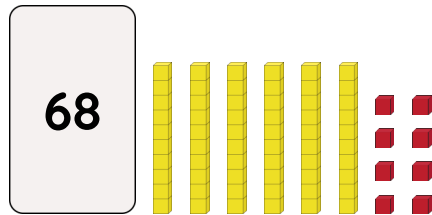


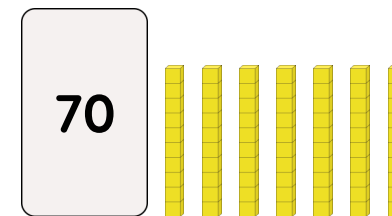
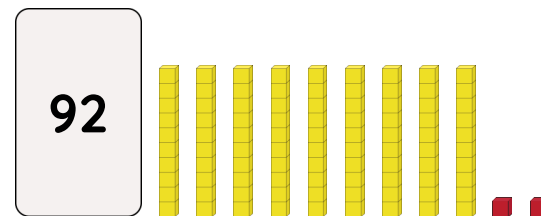
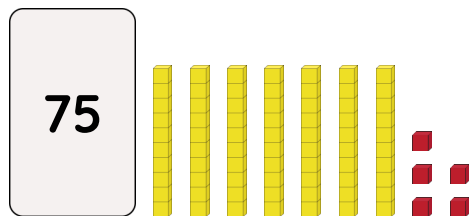
Master Ordering Number Representations to 100 B

Fluency 1

Complete the stem sentences.



They each have ____ tens. ____ has fewer ones than ____ and _____. ____ has fewer ones than _____. The smallest number is ____ and the greatest number is ____.



____ has more tens than ____ and _____. ____ has more ones than _____. The smallest number is ____ and the greatest number is ____.

Reasoning, answers and teaching slides are available with a subscription.



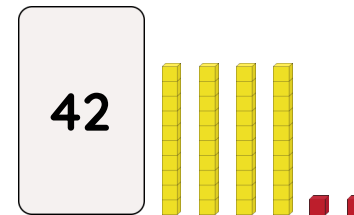
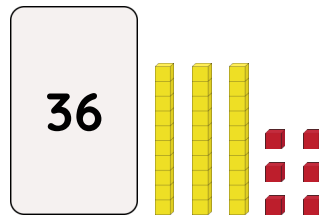

Fluency



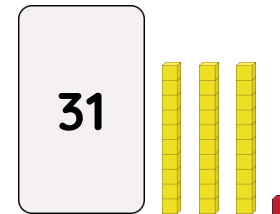

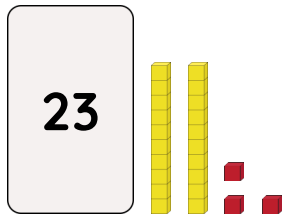
Master Ordering Number Representations to 100 B

Fluency 2

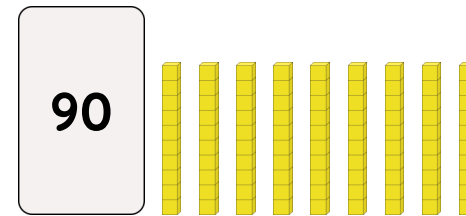
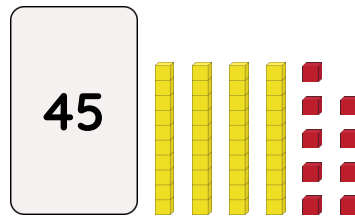

Complete the stem sentences.



The greatest number is _____ and the smallest number is _____



The greatest number is _____ and the smallest number is _____



The greatest number is _____ and the smallest number is _____

Reasoning, answers and teaching slides are available with a subscription.



Fluency



Master Ordering Number Representations to 100 B

Fluency 3

Order the numbers from greatest to smallest.

53

78

47

_____, _____, _____

51

39

100

_____, _____, _____

96

27

62

_____, _____, _____

48

71

85

_____, _____, _____

Fluency 4

Order the numbers from smallest to greatest.

65

34

59

_____, _____, _____

72

86

44

_____, _____, _____

91

97

93

_____, _____, _____

55

28

76

_____, _____, _____

Reasoning, answers and teaching slides are available with a subscription.



Fluency

