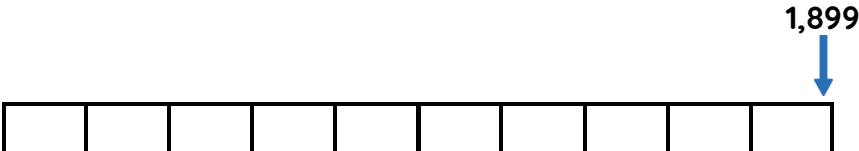
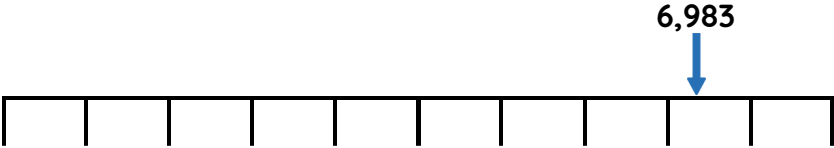
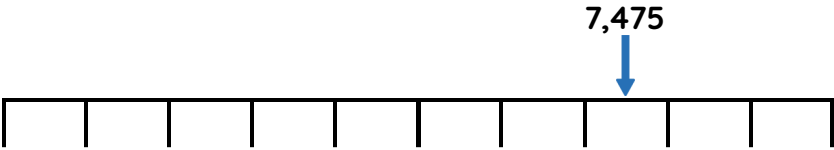
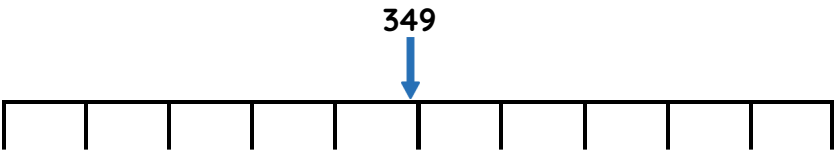


# Master Rounding within 10,000

### Fluency 1

Write the multiples used to round to the nearest 10 and 100



### Fluency 2

Complete the stem sentences for each number in F1

The multiples of 10 before and after \_\_\_\_ are \_\_\_\_ and \_\_\_\_  
\_\_\_\_ rounded to the nearest 10 is \_\_\_\_

The multiples of 100 before and after \_\_\_\_ are \_\_\_\_ and \_\_\_\_  
\_\_\_\_ rounded to the nearest 100 is \_\_\_\_

### Fluency 3

Complete the table.

Number	Nearest 10	Nearest 100
5,674		
3,962		
8,190		

Reasoning, answers and teaching slides are available with a subscription.



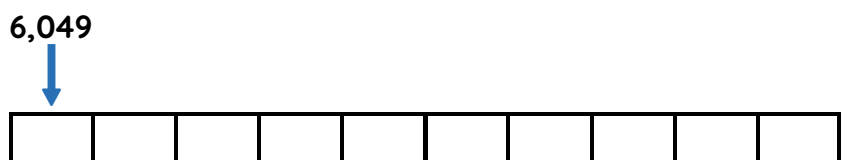
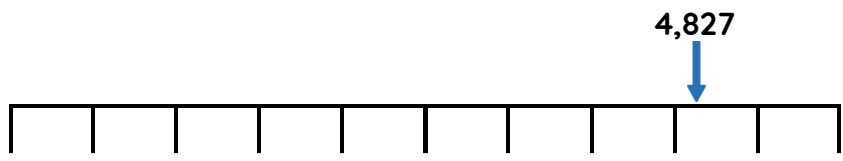
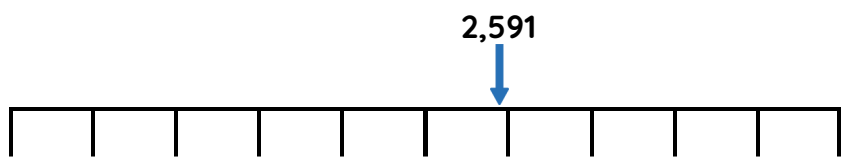
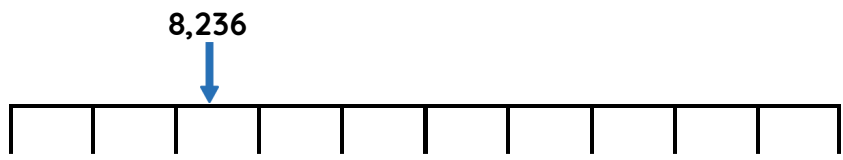
Fluency



# Master Rounding within 10,000

## Fluency 4

Write the multiples used to round to the nearest 100 and 1,000



## Fluency 5

Complete the stem sentences for each number in F4

The multiples of 100 before and after \_\_\_\_ are \_\_\_\_ and \_\_\_\_\_. \_\_\_\_ rounded to the nearest 10 is \_\_\_\_

The multiples of 1,000 before and after \_\_\_\_ are \_\_\_\_ and \_\_\_\_\_. \_\_\_\_ rounded to the nearest 1,000 is \_\_\_\_

## Fluency 6

Complete the table.

Number	Nearest 100	Nearest 1,000
5,380		
688		
9,952		

Reasoning, answers and teaching slides are available with a subscription.



Fluency



# Master Rounding within 10,000

## Fluency 7

Write the range of numbers which could complete the stem sentences.

\_\_\_\_\_ rounded to the nearest 10 is **3,190** and to the nearest 100 is **3,200**

\_\_\_\_\_ rounded to the nearest 10 is **1,750** and to the nearest 100 is **1,800**

\_\_\_\_\_ rounded to the nearest 10 is **4,010** and to the nearest 100 is **4,000**

\_\_\_\_\_ rounded to the nearest 100 is **2,200** to the nearest 1,000 is **2,000**

\_\_\_\_\_ rounded to the nearest 100 is **9,500** and to the nearest 1,000 is **9,000**

\_\_\_\_\_ rounded to the nearest 100 is **7,000** and to the nearest 1,000 is **7,000**

## Fluency 7

Write the range of numbers which could complete the stem sentences.

\_\_\_\_\_ rounded to the nearest 10 is **3,190** and to the nearest 100 is **3,200**

\_\_\_\_\_ rounded to the nearest 10 is **1,750** and to the nearest 100 is **1,800**

\_\_\_\_\_ rounded to the nearest 10 is **4,010** and to the nearest 100 is **4,000**

\_\_\_\_\_ rounded to the nearest 100 is **2,200** to the nearest 1,000 is **2,000**

\_\_\_\_\_ rounded to the nearest 100 is **9,500** and to the nearest 1,000 is **9,000**

\_\_\_\_\_ rounded to the nearest 100 is **7,000** and to the nearest 1,000 is **7,000**

Reasoning, answers and teaching slides are available with a subscription.



Fluency

