


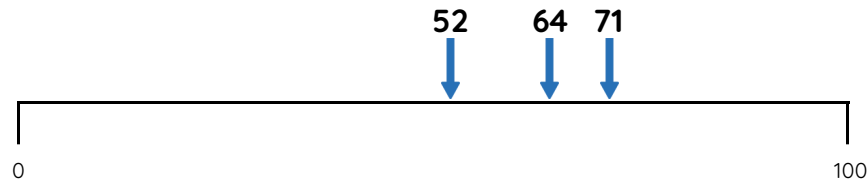
Master Nearest to and Furthest from 100

Fluency 1

Circle the numbers that complete each stem sentence.



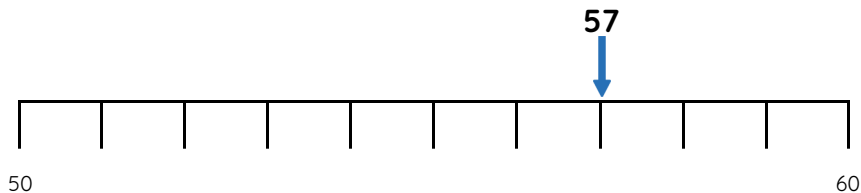
12 is further from **0 / 100** than **0 / 100**



52 / 64 / 71 is nearest to 100

Fluency 3

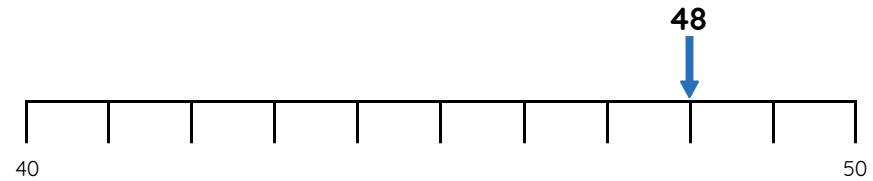
Circle the numbers that complete each stem sentence.



57 is nearer to **50 / 60** than **50 / 60**

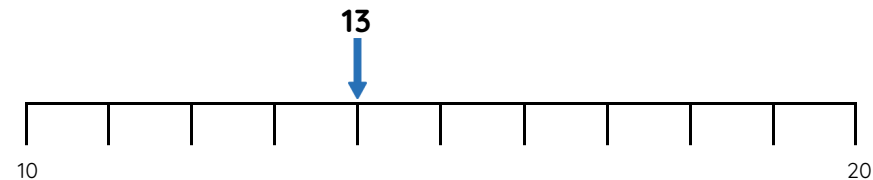
Fluency 2

Complete the stem sentences.



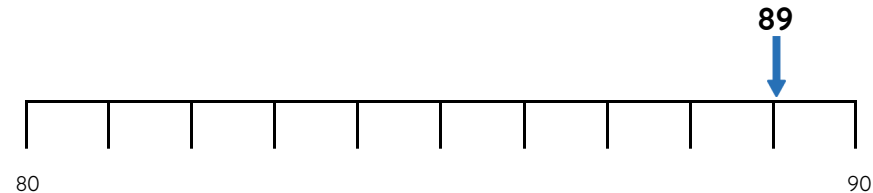
48 is ____ away from 40. 48 is ____ away from 50

48 is further from **40 / 50** than **40 / 50**



13 is ____ away from 10. 13 is ____ away from 20

13 is nearer to **10 / 20** than **10 / 20**



89 is further from **80 / 90** than **80 / 90**

Reasoning, answers and teaching slides are available with a subscription.



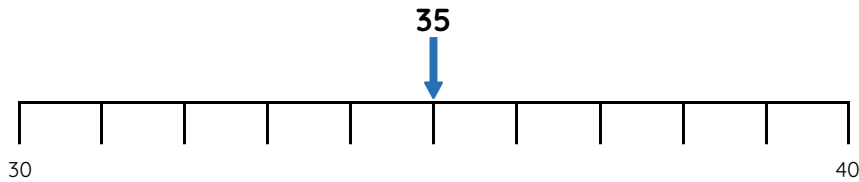
Fluency



Master Nearest to and Furthest from to 100

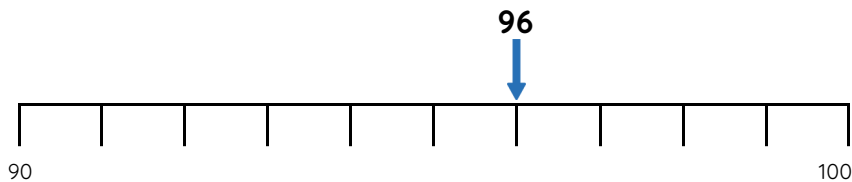
Fluency 4

Complete the stem sentences.



35 is ____ away from 34. 35 is ____ away from 39

35 is further from **34 / 39** than **34 / 39**

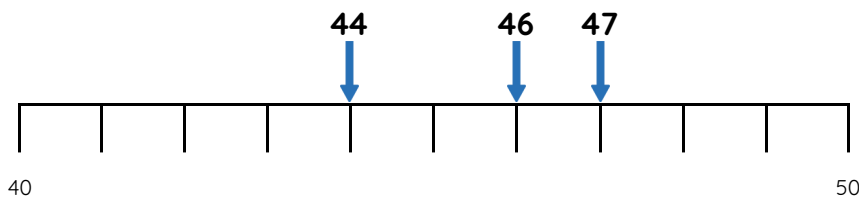


96 is ____ away from 99. 96 is ____ away from 91

96 is nearer to **99 / 91** than **99 / 91**

Fluency 6

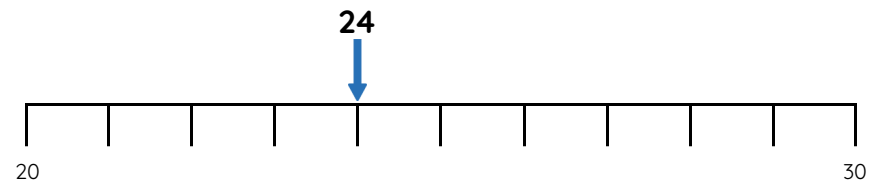
Write the number that completes each stem sentence.



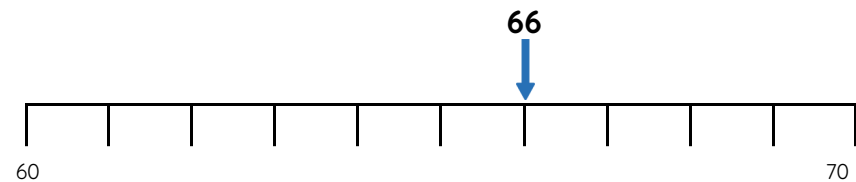
____ is nearest to 40

Fluency 5

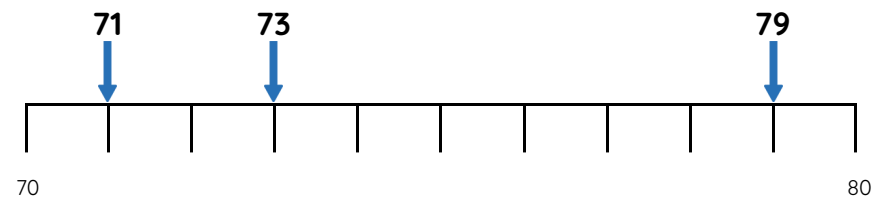
Circle the numbers that complete each stem sentence.



24 is nearer to **21 / 25** than **21 / 25**



66 is further from **62 / 69** than **62 / 69**



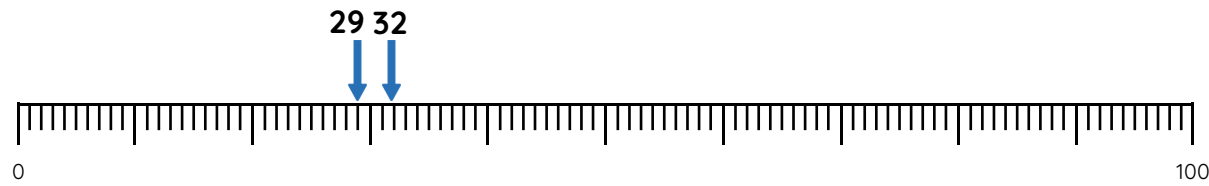
____ is furthest from 74



Master Nearest to and Furthest from 100

Fluency 7

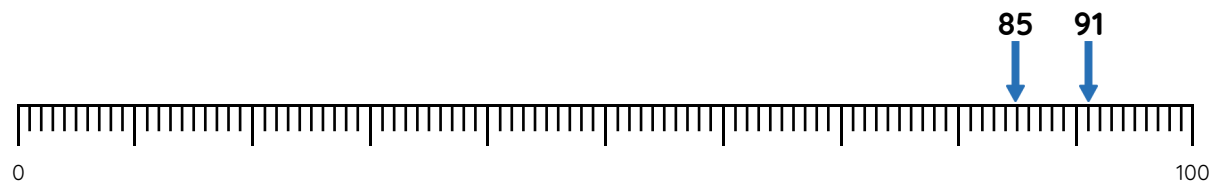
Complete the stem sentences.



29 is ____ away from 30

32 is ____ away from 30

29 / 32 is furthest from 30



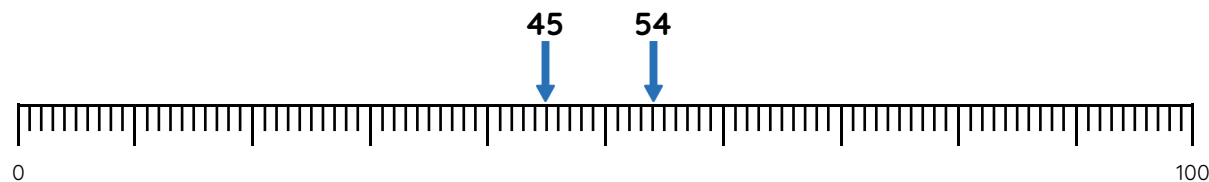
85 is ____ away from 89

91 is ____ away from 89

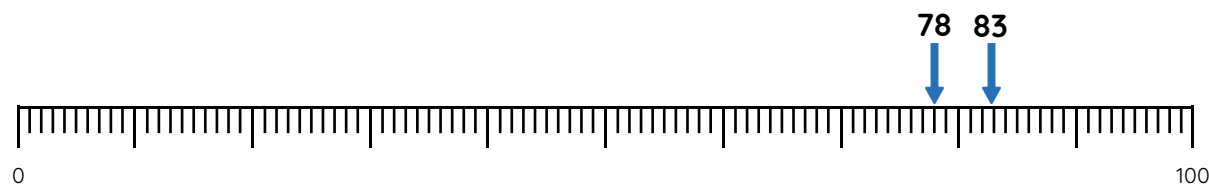
85 / 91 is nearest to 89

Fluency 8

Circle the number that completes each stem sentence.



45 / 54 is nearest to 50



78 / 83 is nearest to 81

Reasoning, answers and teaching slides are available with a subscription.



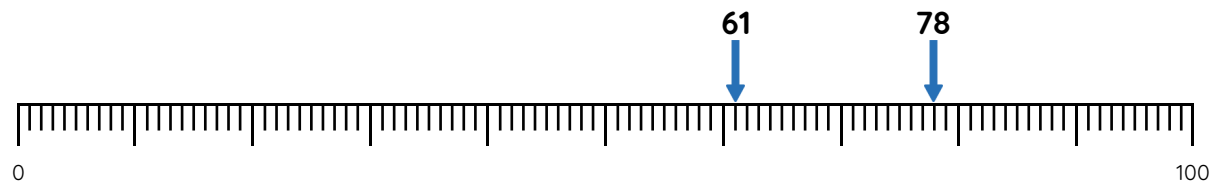
Fluency



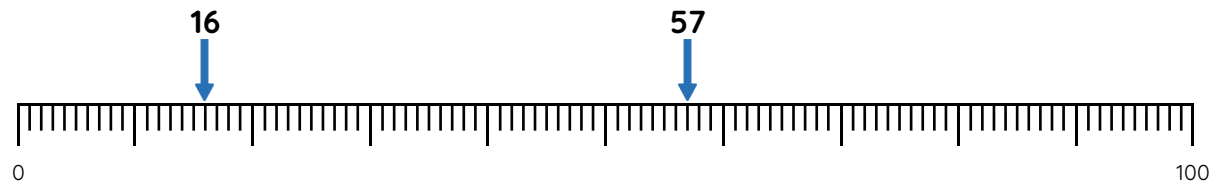
Master Nearest to and Furthest from 100

Fluency 9

Circle the number that completes each stem sentence.



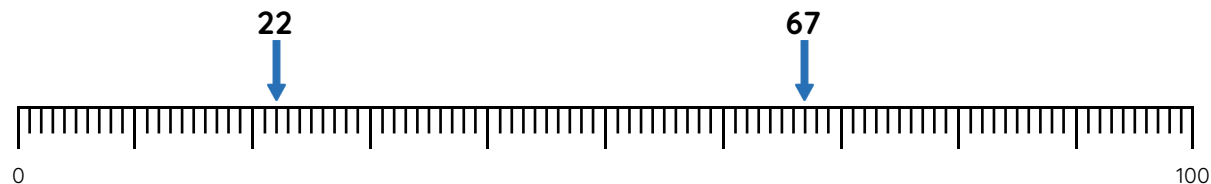
61 / 78 is furthest from 70



16 / 57 is furthest from 35

Fluency 10

Write the number that completes each stem sentence.



22 and _____ are an equal distance from 20

67 and _____ are an equal distance from 64

Reasoning, answers and teaching slides are available with a subscription.



Fluency

