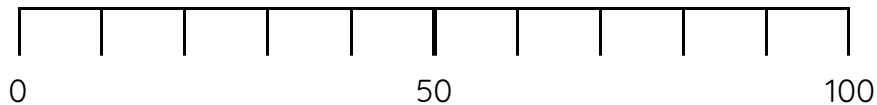


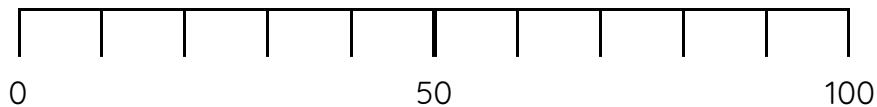
Master The Number Line to 100 B

Fluency 1

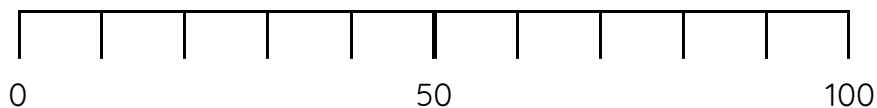
Position 30 onto the number line.



Position 10 onto the number line.

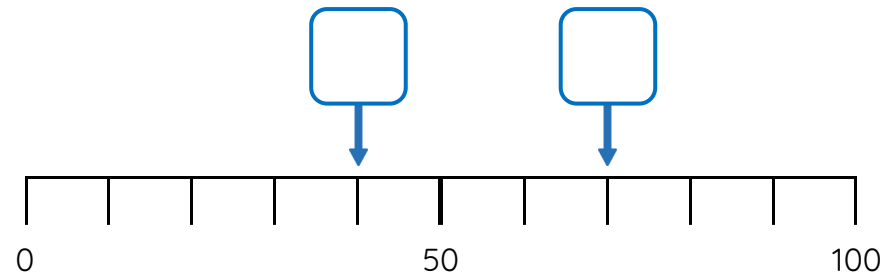


Position 90 onto the number line.



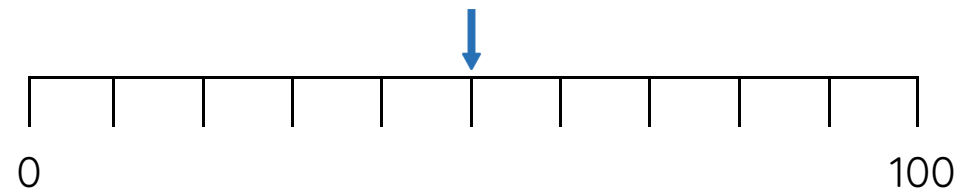
Fluency 2

Which numbers are here on the number line?



Fluency 3

What is the mid-point of the number line?



_____ is the mid-point.

Answers and teaching slides are available with a subscription.



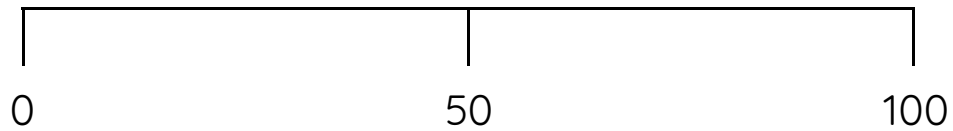
Fluency



Master The Number Line to 100 B

Fluency 4

Circle the numbers to complete the statements.



60 / 20 / 80 is between 0 and 50

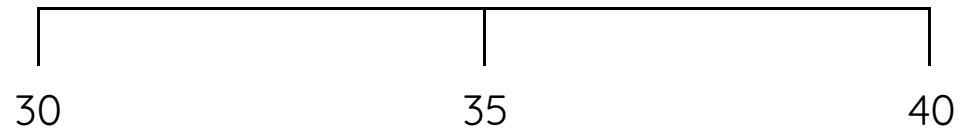
70 / 10 / 30 is between 50 and 100

40 is near to **0 / 50 / 100**

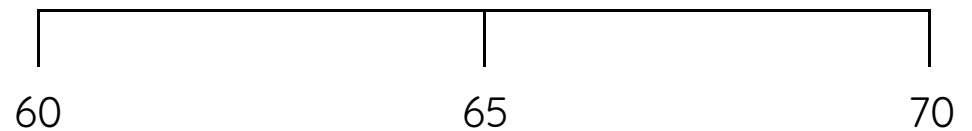
90 is near to **0 / 50 / 100**

Fluency 5

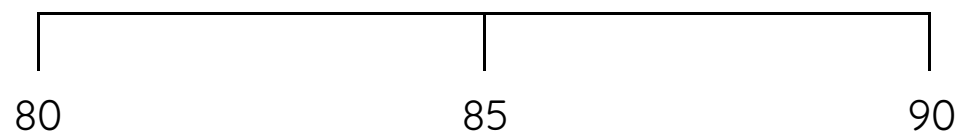
Position 38 onto the number line.



Position 63 onto the number line.



Position 81 onto the number line.



Answers and teaching slides are available with a subscription.



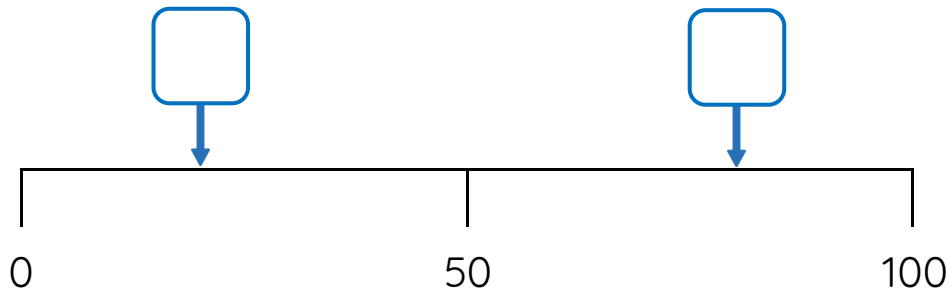
Fluency



Master The Number Line to 100 B

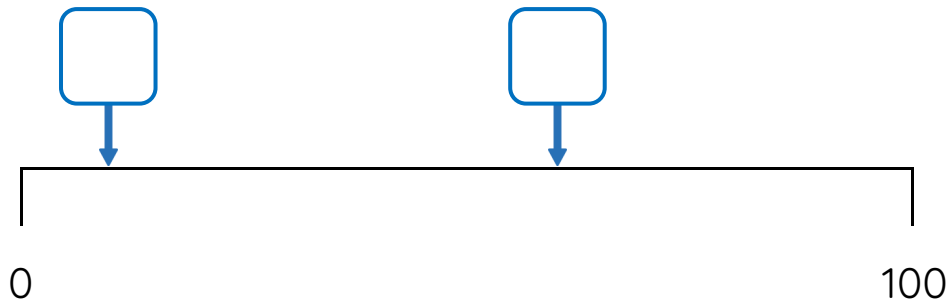
Fluency 6

Which numbers are here on the number line?



Fluency 7

Which numbers are here on the number line?



Fluency 8

Position 52 onto the number line.



Position 47 onto the number line.



Position 74 onto the number line.



Answers and teaching slides are available with a subscription.



Fluency

